






#1




Which of the following objects is a octagon?



Show your work

#2



Which of the following objects is a octagon?



Show your work

#3

Which of the following objects is a pentagon?






Show your work



#4



Which of the following objects is a pentagon?



Show your work

#5


Which of the following objects is a circle?



Show your work

#6

Which of the following objects is a hexagon?





Show your work



#7




Which of the following objects is a triangle?



Show your work

#8




Which of the following objects is a triangle?



Show your work

#9

Which of the following objects is a circle?





Show your work



#10



Which of the following objects is a star?

☐☐☐

Show your work

#11



Which of the following objects is a star?

☐☐☐

Show your work

#12

Which of the following objects is a pentagon?

☐☐☐

Show your work



Question	Answer
#1	choice 2
#2	choice 2
#3	choice 3
#4	choice 1
#5	choice 2
#6	choice 3
#7	choice 2
#8	choice 2
#9	choice 3
#10	choice 3
#11	choice 2
#12	choice 2