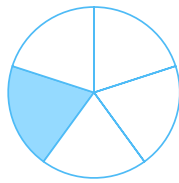


#1

What fraction of the shape is filled?



☐ $\frac{1}{2}$

☐ $\frac{1}{4}$

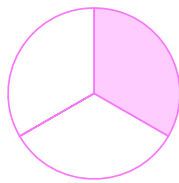
☐ $\frac{1}{3}$

☐ $\frac{1}{5}$

Show your work

#2

What fraction of the shape is filled?



☐ $\frac{1}{5}$

☐ $\frac{1}{2}$

☐ $\frac{1}{4}$

☐ $\frac{1}{3}$

Show your work

#3

What fraction of the shape is filled?



☐ $\frac{1}{2}$

☐ $\frac{1}{3}$

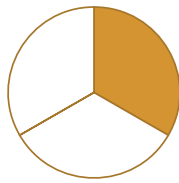
☐ $\frac{1}{5}$

☐ $\frac{1}{4}$

Show your work

#4

What fraction of the shape is filled?



☐ $\frac{1}{4}$

☐ $\frac{1}{3}$

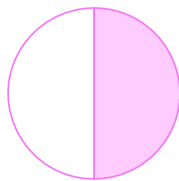
☐ $\frac{1}{2}$

☐ $\frac{1}{5}$

Show your work

#5

What fraction of the shape is filled?



☐ $\frac{1}{4}$

☐ $\frac{1}{2}$

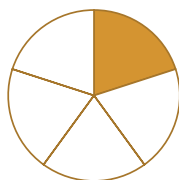
☐ $\frac{1}{3}$

☐ $\frac{1}{5}$

Show your work

#6

What fraction of the shape is filled?



☐ $\frac{1}{5}$

☐ $\frac{1}{4}$

☐ $\frac{1}{3}$

☐ $\frac{1}{2}$

Show your work

#7

What fraction of the shape is filled?



☐ $\frac{1}{4}$

☐ $\frac{1}{3}$

☐ $\frac{1}{5}$

☐ $\frac{1}{2}$

Show your work

#8

What fraction of the shape is filled?



☐ $\frac{1}{3}$

☐ $\frac{1}{2}$

☐ $\frac{1}{4}$

☐ $\frac{1}{5}$

Show your work

#9

What fraction of the shape is filled?



☐ $\frac{1}{5}$

☐ $\frac{1}{2}$

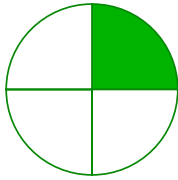
☐ $\frac{1}{4}$

☐ $\frac{1}{3}$

Show your work

#10

What fraction of the shape is filled?



☐ $\frac{1}{3}$

☐ $\frac{1}{2}$


☐ $\frac{1}{5}$

☐ $\frac{1}{4}$

Show your work

#11

What fraction of the shape is filled?



☐ $\frac{1}{2}$

☐ $\frac{1}{5}$

☐ $\frac{1}{4}$

☐ $\frac{1}{3}$

Show your work

#12

What fraction of the shape is filled?



☐ $\frac{1}{4}$

☐ $\frac{1}{3}$

☐ $\frac{1}{5}$

☐ $\frac{1}{2}$

Show your work

Question	Answer
#1	choice 4
#2	choice 4
#3	choice 3
#4	choice 2
#5	choice 2
#6	choice 1
#7	choice 4
#8	choice 4
#9	choice 4
#10	choice 4
#11	choice 4
#12	choice 2