


#1

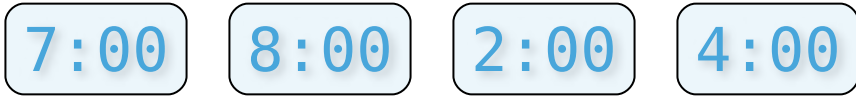
Which of these clocks shows the time 10:00?



Show your work

#2

Which of these clocks shows the time 7:00?



Show your work

#3

Which of these clocks shows the time 11:00?



Show your work

#4

Which of these clocks shows the time 9:00?

6:00 2:00 3:00 9:00

Show your work

#5


Which of these clocks shows the time 5:00?

2:00 5:00 12:00 6:00

Show your work

#6


Which of these clocks shows the time 12:00?



Show your work

#7

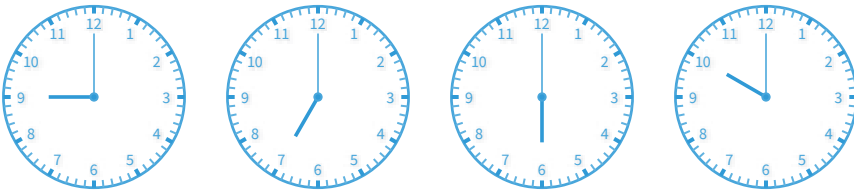
Which of these clocks shows the time 3:00?



Show your work

#8


Which of these clocks shows the time 9:00?



Show your work

#9

Which of these clocks shows the time 2:00?



Show your work

#10

Which of these clocks shows the time 8:00?

8:00 2:00 11:00 7:00

Show your work

#11

Which of these clocks shows the time 5:00?

9:00 1:00 12:00 5:00

Show your work

#12

Which of these clocks shows the time 11:00?

12:00 11:00 2:00 3:00

Show your work

Question	Answer
#1	choice 4
#2	choice 1
#3	choice 4
#4	choice 4
#5	choice 2
#6	choice 4
#7	choice 4
#8	choice 1
#9	choice 3
#10	choice 1
#11	choice 4
#12	choice 2