

#1


The clocks show three things Ella did Tuesday evening. Which did Ella do first?



math



science



history

- math     
  science     
  history

Show your work

#2

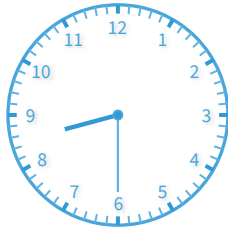
The clocks show three things Lauren did Thursday evening. Which did Lauren do last?



soccer



homework



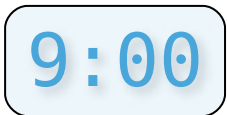
eat

- soccer     
  homework     
  eat

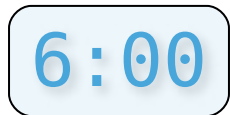
Show your work

#3

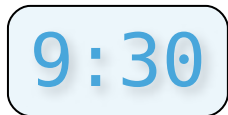
The clocks show three things Gabriel did Monday evening. Which did Gabriel do last?



phone  
call



fed fish



play

- fed fish     
  play     
  phone call

Show your work

#4

The clocks show three things Lily did Tuesday evening. Which did Lily do last?



math



science



history

- math     
  science     
  history


Show your work

#5

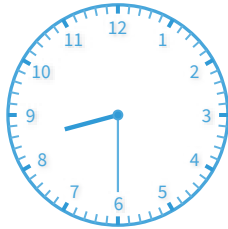
The clocks show three things Jacob did Monday evening. Which did Jacob do first?



phone call



fed fish



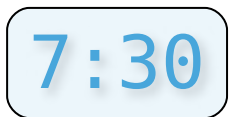
play

- phone call     
  play     
  fed fish

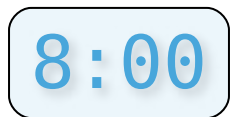
Show your work

#6

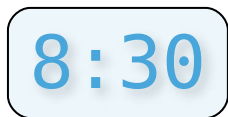
The clocks show three things Ethan did Wednesday evening. Which did Ethan do first?



play games



violin



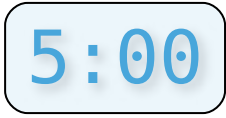
walk dog

- violin     
  play games     
  walk dog

Show your work

#7

The clocks show three things Kaylee did Thursday evening. Which did Kaylee do first?



homework



read



eat

- homework     
  read     
  eat

Show your work

#8

The clocks show three things Madeline did Thursday evening. Which did Madeline do first?



homework



read



eat

- homework     
  eat     
  read


Show your work

#9

The clocks show three things Christopher did Thursday evening. Which did Christopher do last?



soccer



homework



eat

- eat     
  soccer     
  homework

Show your work

#10

The clocks show three things Ethan did Tuesday evening. Which did Ethan do last?



math



science



history

- science     
  history     
  math

Show your work

#11

The clocks show three things Kaylee did Thursday evening. Which did Kaylee do last?



soccer



homework



eat

- eat     
  soccer     
  homework

Show your work

#12

The clocks show three things Brayden did Wednesday evening. Which did Brayden do first?



play games



violin



walk dog

- walk dog     
  violin     
  play games

Show your work

Question	Answer
#1	choice 1
#2	choice 3
#3	choice 2
#4	choice 1
#5	choice 2
#6	choice 2
#7	choice 1
#8	choice 1
#9	choice 3
#10	choice 3
#11	choice 1
#12	choice 3