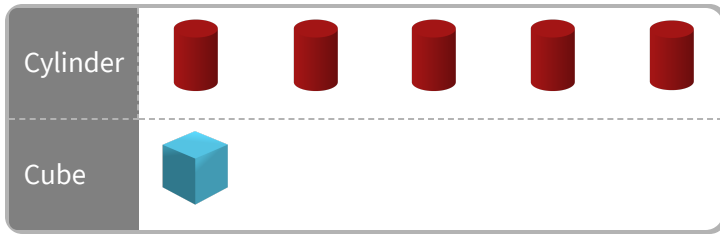


#1

In a box of building blocks Zoe found a chart of the different blocks. How many cylinders are there?



7

8

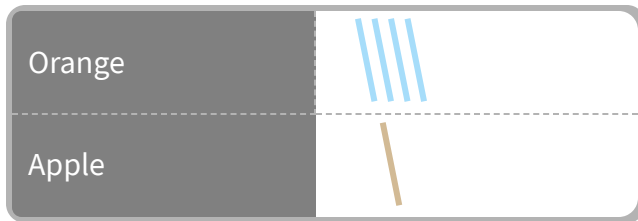
5

6

Show your work

#2



Landon's mom gave him a chart of the fruit he needs to buy. How many oranges does Landon have to buy?



Show your work

#3

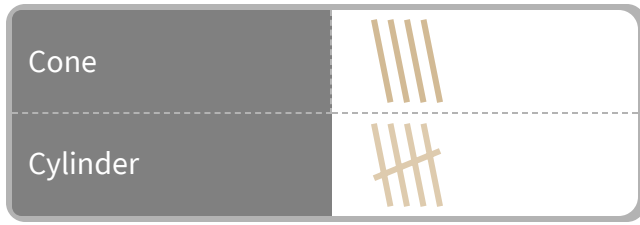
This is a chart of the dinnerware in Dylan's kitchen. Are there more bowls or plates in the kitchen?



Show your work

#4

In a box of building blocks Anna found a chart of the different blocks. How many cones are there?




- 5 6
 1 4

Show your work

#5

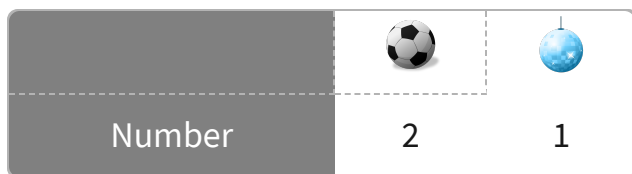
Kayla is doing inventory at her sporting goods store and made a chart. How many skateboards does the store have?



Show your work

#6

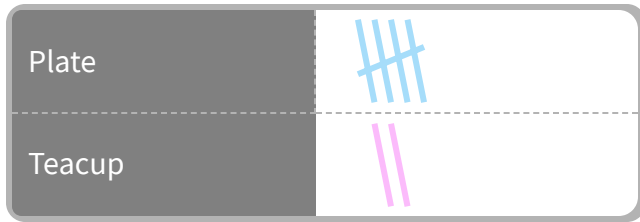
At the sphere store, Daniel made a chart of the spheres that he had seen. Did Daniel see more soccer balls or disco balls?



Show your work

#7


This is a chart of the dinnerware in Logan's kitchen.
How many plates are in Logan's kitchen?



Show your work

#8

For a school assignment Matilda made a chart of the furniture in her room. How many chairs did Matilda see?




- 4
- 5
- 3
- 0

Show your work

#9


Alexander made a chart of the coins in his pocket. How many quarters does Alexander have?



Show your work

#10

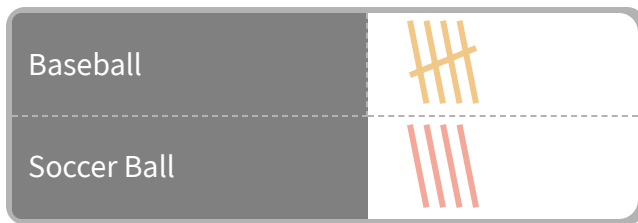
At the zoo, Benjamin made a tally chart of the animals that he had seen. How many ants did Benjamin see?



Show your work

#11

The chart shows the number of balls in the school gym. How many baseballs are there?




- 4
- 8
- 7
- 5

Show your work

#12

Isabella's mom gave her a chart of the fruit she needs to buy. How many apples does Isabella have to buy?



- 1
- 4
- 3
- 2

Show your work

Question	Answer
#1	5
#2	4
#3	choice 2
#4	4
#5	5
#6	choice 1
#7	5
#8	3
#9	3
#10	4
#11	5
#12	1