

#1

Count the boxes. Now type the missing numbers:



$$\boxed{\phantom{00}} \text{ tens} + \boxed{\phantom{00}} \text{ ones} = \boxed{\phantom{00}}$$

Show your work

#2

Count the buses. Now type the missing numbers:




$$\boxed{\phantom{00}} \text{ tens} + \boxed{\phantom{00}} \text{ ones} = \boxed{\phantom{00}}$$

Show your work

#3

Count the batteries. Now type the missing numbers:



$$\boxed{\phantom{00}} \text{ tens} + \boxed{\phantom{00}} \text{ ones} = \boxed{\phantom{00}}$$

Show your work

#4

Count the bowls. Now type the missing numbers:



$$\boxed{\phantom{00}} \text{ tens} + \boxed{\phantom{00}} \text{ ones} = \boxed{\phantom{00}}$$

Show your work

#5

Count the bicycles. Now type the missing numbers:



$$\boxed{\phantom{00}} \text{ tens} + \boxed{\phantom{00}} \text{ ones} = \boxed{\phantom{00}}$$

Show your work

#6

Count the trains. Now type the missing numbers:



$$\boxed{\phantom{00}} \text{ tens} + \boxed{\phantom{00}} \text{ ones} = \boxed{\phantom{00}}$$

Show your work

#7

Count the cell phones. Now type the missing numbers:



$$\boxed{\phantom{00}} \text{ tens} + \boxed{\phantom{00}} \text{ ones} = \boxed{\phantom{00}}$$

Show your work

#8

Count the skateboards. Now type the missing numbers:



$$\boxed{\phantom{00}} \text{ tens} + \boxed{\phantom{00}} \text{ ones} = \boxed{\phantom{00}}$$

Show your work

#9

Count the clovers. Now type the missing numbers:




$$\boxed{\phantom{00}} \text{ tens} + \boxed{\phantom{00}} \text{ ones} = \boxed{\phantom{00}}$$

Show your work

#10

Count the grapes. Now type the missing numbers:




$$\boxed{\phantom{00}} \text{ tens} + \boxed{\phantom{00}} \text{ ones} = \boxed{\phantom{00}}$$

Show your work

#11

Count the planes. Now type the missing numbers:



$$\boxed{\phantom{00}} \text{ tens} + \boxed{\phantom{00}} \text{ ones} = \boxed{\phantom{00}}$$

Show your work

#12

Count the records. Now type the missing numbers:



$$\boxed{\phantom{00}} \text{ tens} + \boxed{\phantom{00}} \text{ ones} = \boxed{\phantom{00}}$$

Show your work

Question	Answer
#1	15, 5, 1
#2	20, 0, 2
#3	2, 2, 0
#4	18, 8, 1
#5	10, 0, 1
#6	17, 7, 1
#7	1, 1, 0
#8	16, 6, 1
#9	16, 6, 1
#10	11, 1, 1
#11	12, 2, 1
#12	16, 6, 1