



#1


How many corners does this shape have?

☐ 5☐ 4☐ 1☐ 3

Show your work

#2

How many corners does this shape have?

☐ 2☐ 4☐ 1☐ 6

Show your work

#3

How many sides does this shape have?


☐ 6☐ 5☐ 4☐ 3

Show your work



#4

How many sides does this shape have?

☐ 1☐ 6☐ 4☐ 2

Show your work

#5

How many sides does this shape have?

☐ 6☐ 2☐ 4☐ 1

Show your work

#6

How many corners does this shape have?


☐ 5☐ 4☐ 2☐ 3

Show your work



#7


How many sides does this shape have?

☐ 1☐ 2☐ 4☐ 6

Show your work

#8

How many sides does this shape have?

☐ 1☐ 4☐ 5☐ 2

Show your work

#9

How many corners does this shape have?

☐ 4☐ 2☐ 1☐ 5

Show your work



#10

How many corners does this shape have?

☐ 3☐ 5☐ 4☐ 7

Show your work

#11


How many corners does this shape have?

☐ 8☐ 9☐ 4☐ 6

Show your work

#12

How many sides does this shape have?

☐ 4☐ 2☐ 3☐ 7

Show your work



Question	Answer
#1	3
#2	4
#3	4
#4	4
#5	4
#6	3
#7	4
#8	4
#9	4
#10	4
#11	6
#12	4