


#1

Subtract



Show your work

#2

Subtract



☐ 2

☐ 4

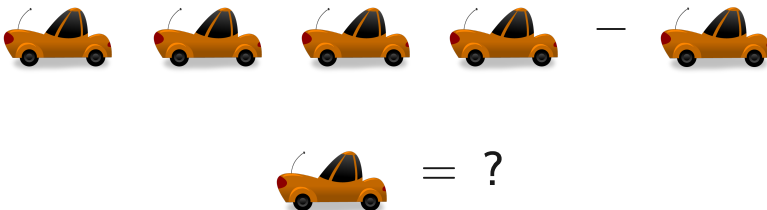
☐ 0

☐ 1

Show your work

#3

Subtract



☐ 0

☐ 1

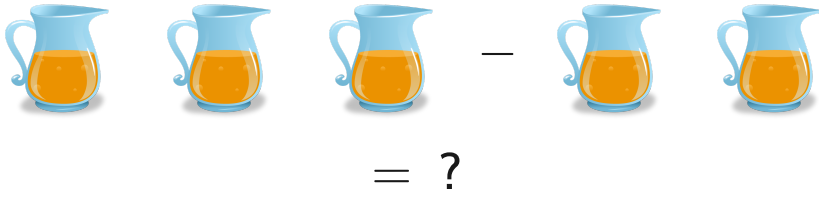
☐ 2

☐ 3

Show your work

#4

Subtract



☐ 4

☐ 1

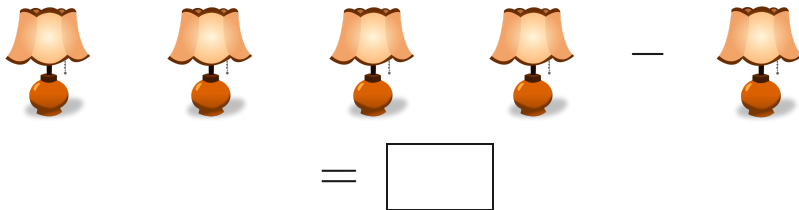
☐ 0

☐ 3

Show your work

#5


Subtract



Show your work

#6


Subtract



Show your work

#7


Subtract



Show your work

#8

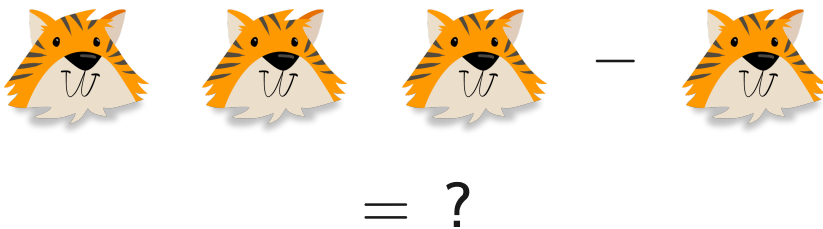
Subtract



Show your work

#9

Subtract



☐ 4

☐ 5

☐ 2

☐ 3

Show your work

#10

Subtract



☐ 2

☐ 3

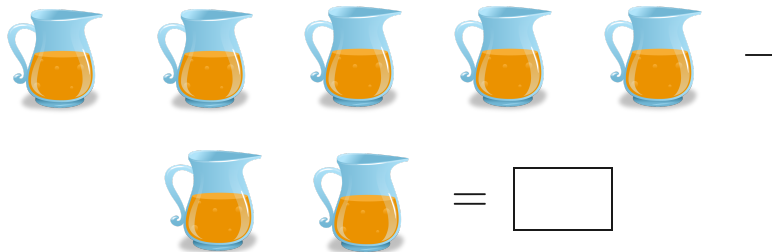
☐ 4

☐ 1

Show your work

#11

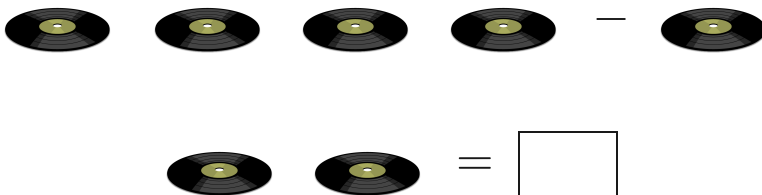
Subtract



Show your work

#12

Subtract



Show your work

Question	Answer
#1	1
#2	1
#3	2
#4	1
#5	3
#6	2
#7	2
#8	1
#9	2
#10	1
#11	3
#12	1