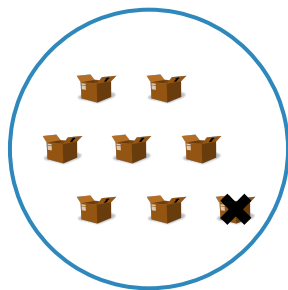



#1



Which picture shows  $8 - 1 = 7$ ?



Show your work

#2


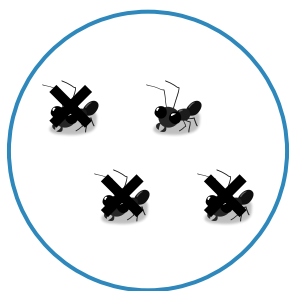
Which picture shows  $6 - 1 = 5$ ?



Show your work

#3

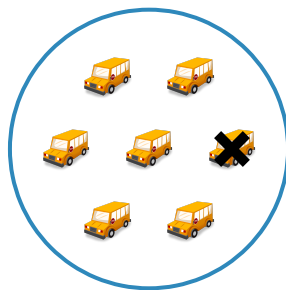

Which picture shows  $4 - 3 = 1$ ?



Show your work

#4

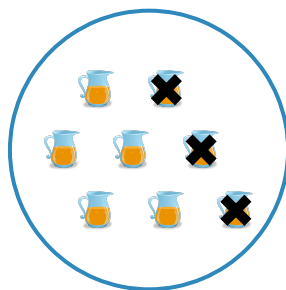
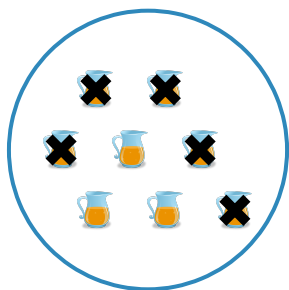
Which picture shows  $7 - 1 = 6$ ?



Show your work

#5



Which picture shows  $8 - 5 = 3$ ?



Show your work

#6



Which picture shows  $4 - 3 = 1$ ?



Show your work

#7



Which picture shows  $6 - 1 = 5$ ?



Show your work

#8

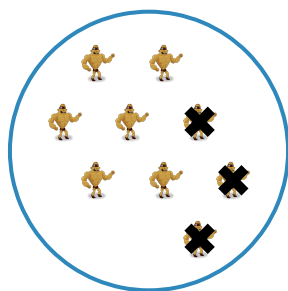

Which picture shows  $6 - 5 = 1$ ?



Show your work

#9



Which picture shows  $9 - 3 = 6$ ?



Show your work

#10



Which picture shows  $6 - 1 = 5$ ?



Show your work

#11

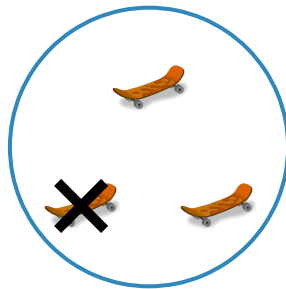
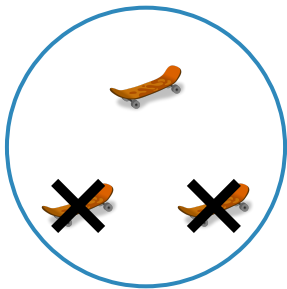
Which picture shows  $5 - 4 = 1$ ?



Show your work

#12

Which picture shows  $3 - 2 = 1$ ?



Show your work

Question	Answer
#1	choice 2
#2	choice 1
#3	choice 1
#4	choice 2
#5	choice 1
#6	choice 2
#7	choice 1
#8	choice 2
#9	choice 2
#10	choice 1
#11	choice 1
#12	choice 1