

#1

How many edges does this object have?



3

8


4

6

Show your work

#2

How many edges does this object have?



6

5

8

11

Show your work

#3

How many edges does this object have?



3

6

9

5

Show your work

#4

How many edges does this object have?



8

7


6

9

Show your work

#5

How many edges does this object have?



8

12

10

16

Show your work

#6

How many edges does this object have?



7

8

10

6

Show your work

#7

How many edges does this object have?



8

9


6

11

Show your work

#8

How many edges does this object have?



8

14


9

12

Show your work

#9

How many edges does this object have?



12

8


16

10

Show your work

#10

How many edges does this object have?



8

9


12

16

Show your work

#11

How many edges does this object have?



8

16


10

12

Show your work

#12

How many edges does this object have?



14

12

13

15

Show your work

Question	Answer
#1	6
#2	8
#3	6
#4	6
#5	12
#6	8
#7	9
#8	12
#9	12
#10	12
#11	12
#12	12