



#1

How many vertices does this object have?



7

4


6

5

Show your work

#2

How many vertices does this object have?



8

10


6

11

Show your work

#3

How many vertices does this object have?



11

10

8

6

Show your work



#4

How many vertices does this object have?



7

4

6

8

Show your work

#5

How many vertices does this object have?



3

5

4

8

Show your work

#6

How many vertices does this object have?



4

5

6


2

Show your work



#7

How many vertices does this object have?



10

5


8

9

Show your work

#8

How many vertices does this object have?



8

7


9

5

Show your work

#9

How many vertices does this object have?



6

8

9


7

Show your work



#10

How many vertices does this object have?



3

1


6

4

Show your work

#11

How many vertices does this object have?



7

10


8

5

Show your work

#12

How many vertices does this object have?



6

10

5

8

Show your work

Question	Answer
#1	5
#2	8
#3	8
#4	6
#5	5
#6	5
#7	8
#8	8
#9	6
#10	4
#11	8
#12	8