

#1

How many faces does this object have?



2

5

8

3

Show your work

#2

How many faces does this object have?



6

7

2

5

Show your work

#3

How many faces does this object have?



4

2


6

5

Show your work

#4

How many faces does this object have?



2

3


5

8

Show your work

#5

How many faces does this object have?



5

8

6

3

Show your work

#6

How many faces does this object have?



2

8


5

3

Show your work

#7

How many faces does this object have?



6

4

5

8

Show your work

#8

How many faces does this object have?



4

5

6

2

Show your work

#9

How many faces does this object have?



3

7


5

4

Show your work

#10

How many faces does this object have?



6

2


5

8

Show your work

#11

How many faces does this object have?



4

8


6

9

Show your work

#12

How many faces does this object have?



5

3

8

4

Show your work

| Question | Answer |
|----------|--------|
| #1 | 5 |
| #2 | 5 |
| #3 | 5 |
| #4 | 5 |
| #5 | 5 |
| #6 | 5 |
| #7 | 6 |
| #8 | 4 |
| #9 | 5 |
| #10 | 5 |
| #11 | 6 |
| #12 | 5 |