




#1

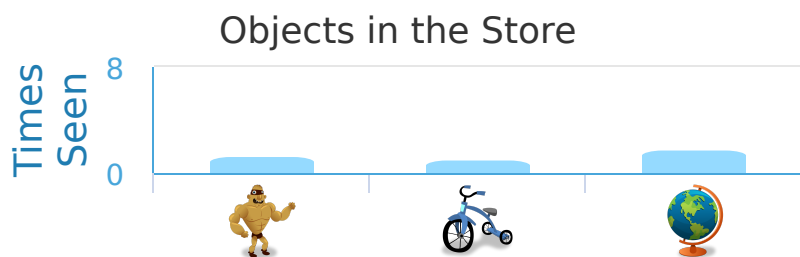
While at the store Madeline made a bar graph of all the things that she'd seen. How many more globes than action figures did Madeline see?



Show your work

#2

While at the store Andrew made a bar graph of all the things that he'd seen. How many more action figures than tricycles did Andrew see?




- ☐ 4 more ☐ 1 more
- ☐ 2 more ☐ 3 more

Show your work

#3

While at the store Sydney made a bar graph of all the things that she'd seen. How many more globes than action figures did Sydney see?



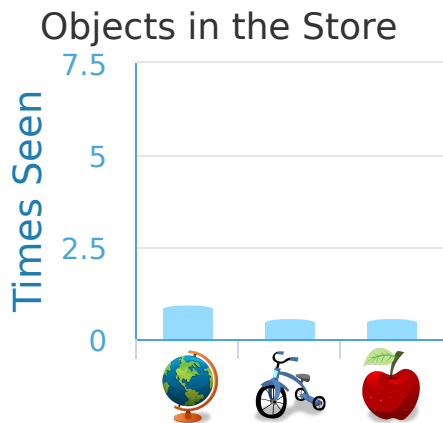
- ☐ 2 more ☐ 1 more
- ☐ 5 more ☐ 3 more

Show your work



#4

While at the store Jacob made a bar graph of all the things that he'd seen. How many more globes than tricycles did Jacob see?

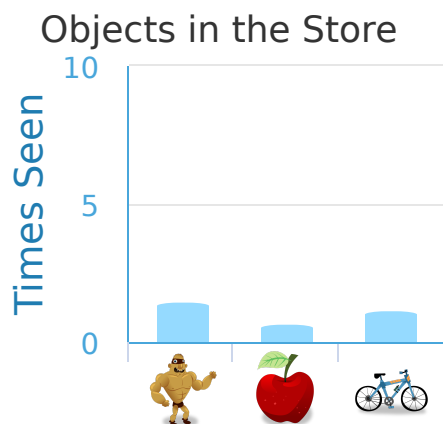


more

Show your work

#5

While at the store Emma made a bar graph of all the things that she'd seen. How many more action figures than apples did Emma see?

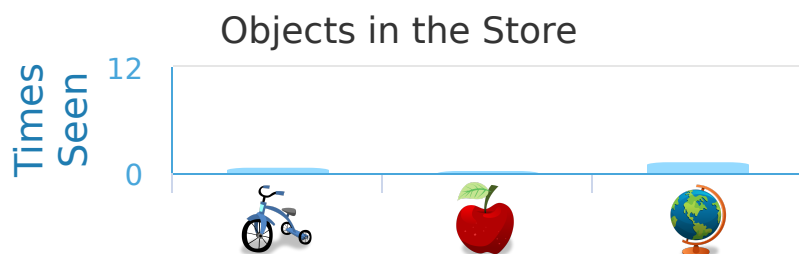


more

Show your work

#6

While at the store Nick made a bar graph of all the things that he'd seen. How many more tricycles than apples did Nick see?

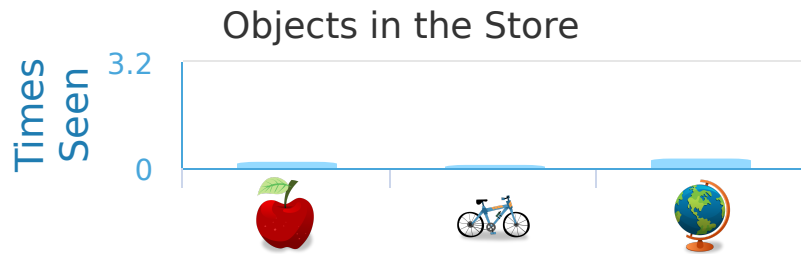


- ☐ 6 more ☐ 5 more
- ☐ 3 more ☐ 2 more

Show your work

#7

While at the store Dylan made a bar graph of all the things that he'd seen. How many more apples than bicycles did Dylan see?



- ☐ 1 more
 ☐ 4 more
- ☐ 2 more
 ☐ 3 more

Show your work

#8

While at the store Joseph made a bar graph of all the things that he'd seen. How many more tricycles than globes did Joseph see?



Show your work

#9

While at the store Connor made a bar graph of all the things that he'd seen. How many more action figures than globes did Connor see?



Show your work



#10

While at the store Savannah made a bar graph of all the things that she'd seen. How many more apples than globes did Savannah see?



Show your work

#11

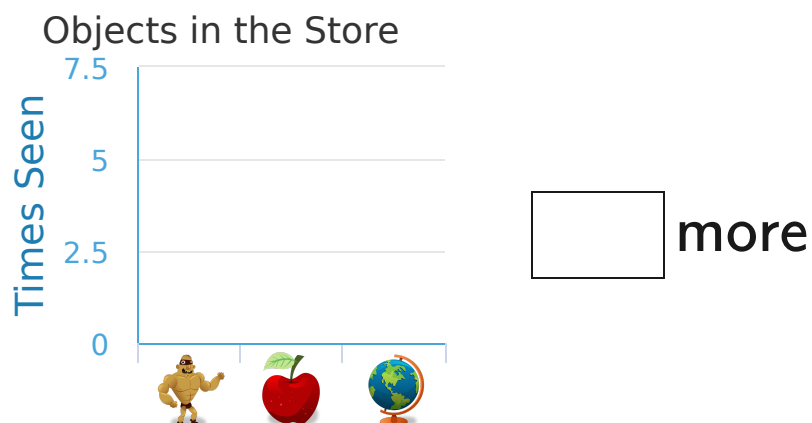
While at the store Lily made a bar graph of all the things that she'd seen. Which things did Lily see most?



Show your work

#12

While at the store Christopher made a bar graph of all the things that he'd seen. How many more action figures than apples did Christopher see?



Show your work

Question	Answer
#1	2
#2	choice 2
#3	choice 1
#4	2
#5	5
#6	choice 3
#7	choice 1
#8	2
#9	8
#10	5
#11	choice 3
#12	1