

#1

Which of the following numbers are even?
Select all that apply.

☐ ☐ ☐ ☐

Show your work

#2

Which of the following numbers are odd?
Select all that apply.

☐ ☐ ☐ ☐

Show your work

#3

Which of the following numbers are odd?
Select all that apply.

☐ ☐ ☐ ☐

Show your work

#4

Which of the following numbers are even?
Select all that apply.

☐ ☐ ☐ ☐

Show your work

#5


Which of the following numbers are odd?
Select all that apply.

☐ ☐ ☐ ☐

Show your work

#6


Which of the following numbers are odd?
Select all that apply.

☐ ☐ ☐ ☐

Show your work

#7

Which of the following numbers are odd?
Select all that apply.

☐ ☐ ☐ ☐

Show your work

#8

Which of the following numbers are odd?
Select all that apply.

☐ ☐ ☐ ☐

Show your work

#9

Which of the following numbers are odd?
Select all that apply.

☐ ☐ ☐ ☐

Show your work

#10


Which of the following numbers are odd?
Select all that apply.

☐ ☐ ☐ ☐

Show your work

#11

Which of the following numbers are even?
Select all that apply.

☐ ☐ ☐ ☐

Show your work

#12

Which of the following numbers are even?
Select all that apply.

☐ ☐ ☐ ☐

Show your work

Question	Answer
#1	choice 4, choice 2
#2	choice 1, choice 2
#3	choice 4, choice 2
#4	choice 4, choice 3
#5	choice 2, choice 4, choice 1
#6	choice 1
#7	choice 4
#8	choice 3
#9	choice 2
#10	choice 2, choice 4
#11	choice 1, choice 3, choice 2, choice 4
#12	choice 4, choice 1, choice 2