


#1

How many edges does this object have?



- 12
- 16
- 11
- 8

Show your work

#2

How many edges does this object have?



- 9
- 3
- 6
- 7

Show your work

#3

How many edges does this object have?




- 11
- 8
- 6
- 5

Show your work

#4

How many edges does this object have?



7

6


8

5

Show your work

#5

How many edges does this object have?



10

12

11

16

Show your work

#6

How many edges does this object have?



8

7


6

9

Show your work

#7

How many edges does this object have?



12

10


14

9

Show your work

#8

How many edges does this object have?



15

12

9

13

Show your work

#9

How many edges does this object have?



8

7

9

6

Show your work

#10

How many edges does this object have?



- 5
- 8
- 6
- 11

Show your work

#11

How many edges does this object have?



- 6
- 7
- 8
- 9

Show your work

#12

How many edges does this object have?



- 6
- 8
- 3
- 4

Show your work

Question	Answer
#1	12
#2	6
#3	8
#4	8
#5	12
#6	6
#7	12
#8	12
#9	6
#10	8
#11	8
#12	6