




#1


How many vertices does this object have?

☐ 4☐ 6☐ 1☐ 5

Show your work

#2

How many vertices does this object have?

☐ 3☐ 7☐ 6☐ 4

Show your work

#3

How many vertices does this object have?


☐ 9☐ 6☐ 8☐ 3

Show your work



#4


How many vertices does this object have?

☐ 2☐ 6☐ 1☐ 4

Show your work

#5


How many vertices does this object have?

☐ 5☐ 4☐ 7☐ 2

Show your work

#6

How many vertices does this object have?


☐ 6☐ 7☐ 8☐ 3

Show your work



#7

How many vertices does this object have?

☐ 4☐ 6☐ 1☐ 2

Show your work

#8

How many vertices does this object have?

☐ 4☐ 6☐ 5☐ 8

Show your work

#9

How many vertices does this object have?


☐ 3☐ 6☐ 7☐ 5

Show your work



#10

How many vertices does this object have?

☐ 7☐ 6☐ 4☐ 5

Show your work

#11

How many vertices does this object have?

☐ 8☐ 5☐ 4☐ 7

Show your work

#12

How many vertices does this object have?

☐ 6☐ 7☐ 9☐ 3

Show your work

Question	Answer
#1	4
#2	4
#3	6
#4	4
#5	4
#6	6
#7	4
#8	5
#9	5
#10	5
#11	5
#12	6