




#1


How many faces does this object have?

☐ 5☐ 2☐ 8☐ 4

Show your work

#2


How many faces does this object have?

☐ 6☐ 5☐ 7☐ 4

Show your work

#3

How many faces does this object have?


☐ 3☐ 7☐ 5☐ 6

Show your work



#4

How many faces does this object have?

☐ 6☐ 7☐ 8☐ 4

Show your work

#5


How many faces does this object have?

☐ 1☐ 4☐ 5☐ 6

Show your work

#6

How many faces does this object have?

☐ 6☐ 5☐ 4☐ 7

Show your work



#7

How many faces does this object have?

☐ 7☐ 2☐ 4☐ 5

Show your work

#8

How many faces does this object have?

☐ 3☐ 1☐ 7☐ 4

Show your work

#9

How many faces does this object have?


☐ 2☐ 3☐ 5☐ 8

Show your work



#10


How many faces does this object have?

☐ 5☐ 6☐ 4☐ 9

Show your work

#11

How many faces does this object have?

☐ 3☐ 8☐ 6☐ 7

Show your work

#12

How many faces does this object have?

☐ 1☐ 7☐ 3☐ 4

Show your work



Question	Answer
#1	5
#2	6
#3	6
#4	6
#5	4
#6	6
#7	4
#8	4
#9	5
#10	6
#11	6
#12	4