

#1

Which of these clocks shows the time 8:45?

1:45

7:45

8:45

2:45



Show your work

#2

Which of these clocks shows the time 2:00?

2:00

2:15

9:30

9:00



Show your work

#3

Which of these clocks shows the time 5:15?



Show your work

#4

Which of these clocks shows the time 5:45?

10:15

8:45

5:45

3:00





Show your work

#5

Which of these clocks shows the time 2:00?

2:00

2:15

9:30

9:00





Show your work

#6

Which of these clocks shows the time 2:15?

3:15

2:15

1:00

11:15





Show your work

#7

Which of these clocks shows the time 3:00?

3:00    5:45    5:00    1:00

Show your work

#8

Which of these clocks shows the time 6:15?

6:15    8:30    2:45    9:45

Show your work

#9

Which of these clocks shows the time 1:30?


3:00    1:30    5:15    11:30

Show your work

#10

Which of these clocks shows the time 11:00?

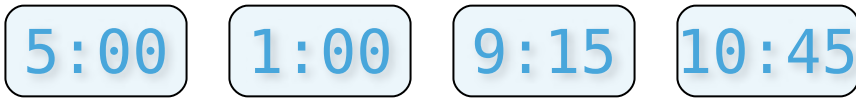


Show your work

#11

Which of these clocks shows the time 10:45?




Show your work

#12

Which of these clocks shows the time 5:15?



Show your work

Question	Answer
#1	choice 3
#2	choice 1
#3	choice 2
#4	choice 3
#5	choice 1
#6	choice 2
#7	choice 1
#8	choice 1
#9	choice 2
#10	choice 1
#11	choice 4
#12	choice 1