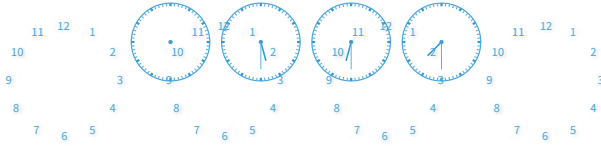


#1

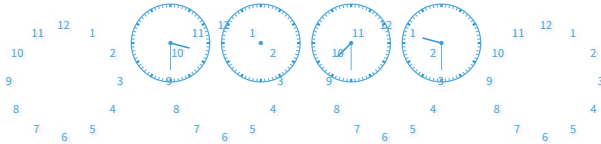
Choose the missing time.



Show your work

#2


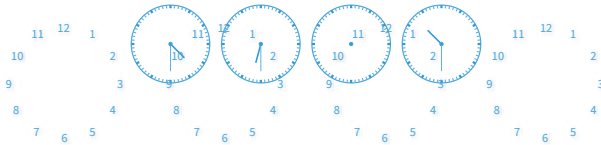
Choose the missing time.



Show your work

#3

Choose the missing time.



Show your work

#4

Choose the missing time.

8:15 12:15 2:15

5:30

10:15

Show your work

#5

Choose the missing time.

12:15 2:15 ??:??

3:15

1:45

Show your work

#6

Choose the missing time.

9:45 11:45 ??:?? 3:45

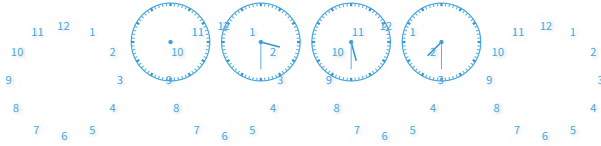
1:45

8:15

Show your work

#7

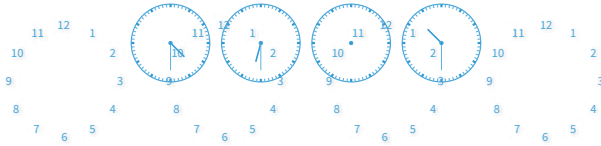
Choose the missing time.



Show your work

#8

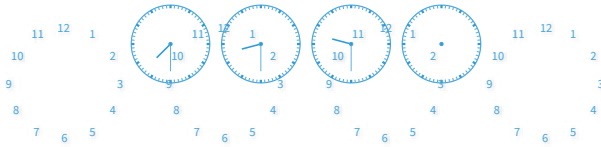
Choose the missing time.



Show your work

#9

Choose the missing time.



Show your work

#10

Choose the missing time.

2:00 4:00 6:00 ??:??

7:45

8:00

Show your work

#11

Choose the missing time.

7:45 ??:?? 9:45 10:45

11:00

8:45

Show your work

#12

Choose the missing time.

7:00 9:00 ??:?? 1:00

11:45

11:00

Show your work

Question	Answer
#1	choice 2
#2	choice 1
#3	choice 2
#4	choice 2
#5	choice 1
#6	choice 1
#7	choice 1
#8	choice 2
#9	choice 2
#10	choice 2
#11	choice 2
#12	choice 2