



#1 You have these coins. Which of these sets of coins do you need to add to make a dollar?





Show your work

#2 You have these coins. Which of these sets of coins do you need to add to make a dollar?





Show your work

#3 You have these coins. Which of these sets of coins do you need to add to make a dollar?





Show your work

#4 You have these coins. Which of these sets of coins do you need to add to make a dollar?





Show your work

#5 You have these coins. Which of these sets of coins do you need to add to make a dollar?





Show your work

#6 You have these coins. Which of these sets of coins do you need to add to make a dollar?





Show your work

#7 You have these coins. Which of these sets of coins do you need to add to make a dollar?





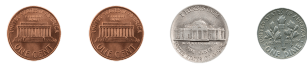
Show your work

#8 You have these coins. Which of these sets of coins do you need to add to make a dollar?



Show your work

#9 You have these coins. Which of these sets of coins do you need to add to make a dollar?



Show your work

#10 You have these coins. Which of these sets of coins do you need to add to make a dollar?





Show your work

#11 You have these coins. Which of these sets of coins do you need to add to make a dollar?



Show your work

#12 You have these coins. Which of these sets of coins do you need to add to make a dollar?



Show your work

Question	Answer
#1	choice 2
#2	choice 1
#3	choice 1
#4	choice 1
#5	choice 2
#6	choice 2
#7	choice 1
#8	choice 2
#9	choice 2
#10	choice 2
#11	choice 2
#12	choice 1