



#1

What is the area of this shape? Every square represents one unit square.

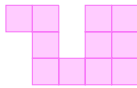


unit squares

Show your work

#2

What is the area of this shape? Every square represents one unit square.



unit squares

Show your work

#3

What is the area of this shape? Every square represents one unit square.




unit squares

Show your work



#4

What is the area of this shape? Every square represents one unit square.

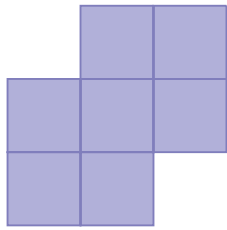


unit squares

Show your work

#5

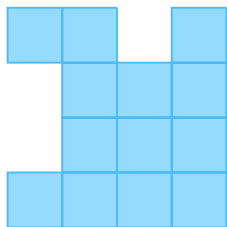
What is the area of this shape? Every square represents one unit square.

☐ 7☐ 8☐ 4☐ 6

Show your work

#6

What is the area of this shape? Every square represents one unit square.

☐ 15☐ 17☐ 11☐ 13

Show your work



#7

What is the area of this shape? Every square represents one unit square.




unit squares

Show your work

#8


What is the area of this shape? Every square represents one unit square.

☐ 7☐ 8☐ 9☐ 12

Show your work

#9

What is the area of this shape? Every square represents one unit square.


☐ 13☐ 17☐ 23☐ 16

Show your work



#10


What is the area of this shape? Every square represents one unit square.

☐ 16☐ 13☐ 15☐ 9

Show your work

#11

What is the area of this shape? Every square represents one unit square.

☐ 11☐ 12☐ 6☐ 9

Show your work

#12

What is the area of this shape? Every square represents one unit square.



unit squares

Show your work



Question	Answer
#1	8
#2	11
#3	9
#4	10
#5	7
#6	13
#7	11
#8	9
#9	17
#10	13
#11	9
#12	9