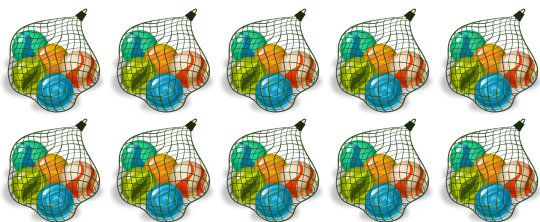


#1

How many marbles are there? Count by fives.

☐ 25☐ 20☐ 50☐ 10

Show your work

#2

How many bananas are there? Count by fives.




Total:

Show your work

#3

How many marbles are there? Count by fives.

☐ 50☐ 10☐ 20☐ 35

Show your work

#4


How many red apples are there? Count by fives.

☐ 35☐ 50☐ 10☐ 5

Show your work

#5

How many red apples are there? Count by fives.




Total:

Show your work

#6

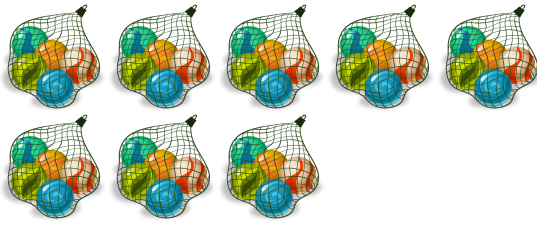
How many red apples are there? Count by fives.

☐ 35☐ 40☐ 45☐ 10

Show your work

#7


How many marbles are there? Count by fives.

☐ 40☐ 10☐ 35☐ 30

Show your work

#8


How many red apples are there? Count by fives.

☐ 35☐ 50☐ 10☐ 5

Show your work

#9


How many marbles are there? Count by fives.

☐ 45☐ 30☐ 40☐ 15

Show your work

#10

How many marbles are there? Count by fives.




Total:

Show your work

#11

How many red apples are there? Count by fives.



☐ 30

☐ 35

☐ 20

☐ 5

Show your work

#12

How many bananas are there? Count by fives.



☐ 20

☐ 30

☐ 45

☐ 15

Show your work

Question	Answer
#1	choice 3
#2	25
#3	choice 1
#4	choice 4
#5	40
#6	choice 1
#7	choice 1
#8	choice 4
#9	choice 4
#10	45
#11	choice 1
#12	choice 2