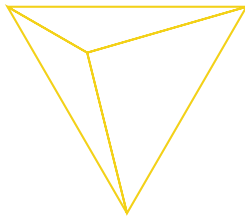

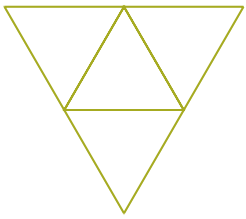


#1

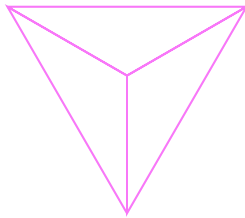
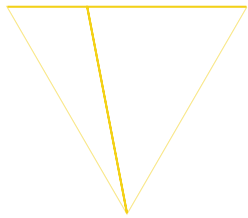

Select all the pictures that show equal parts.



Show your work

#2

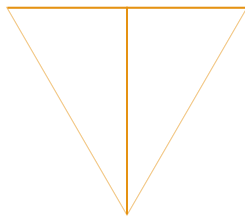
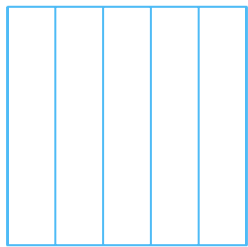

Select all the pictures that show equal parts.



Show your work

#3

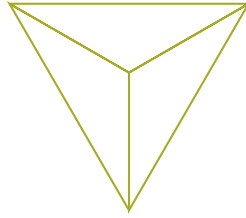
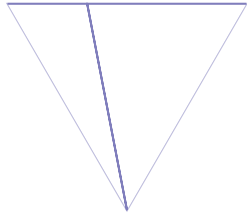

Select all the pictures that show equal parts.



Show your work

#4

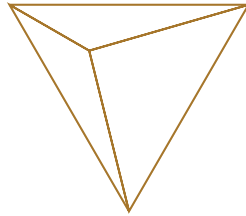

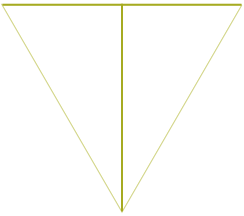
Select all the pictures that show equal parts.


☐
☐
☐

Show your work

#5



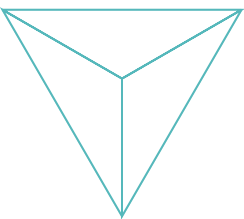
Select all the pictures that show equal parts.


☐
☐
☐

Show your work

#6



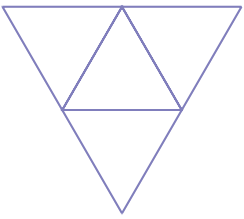
Select all the pictures that show equal parts.


☐
☐
☐

Show your work

#7

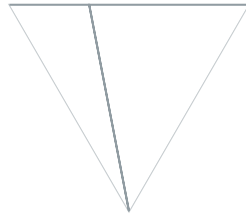
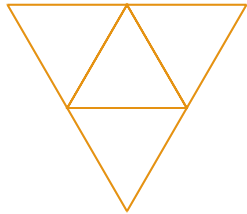

Select all the pictures that show equal parts.



Show your work

#8

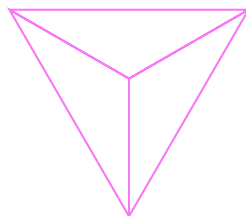


Select all the pictures that show equal parts.



Show your work

#9

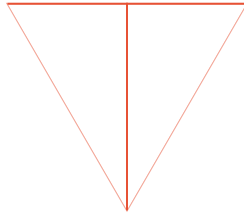

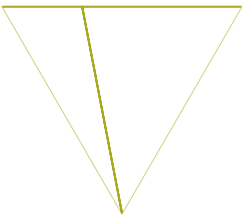
Select all the pictures that show equal parts.



Show your work

#10



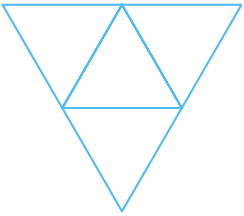
Select all the pictures that show equal parts.



Show your work

#11


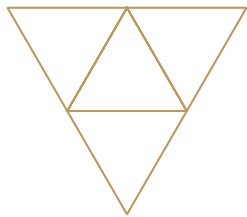

Select all the pictures that show equal parts.



Show your work

#12

Select all the pictures that show equal parts.



Show your work

Question	Answer
#1	choice 1, choice 2
#2	choice 3, choice 1
#3	choice 1, choice 2, choice 3
#4	choice 3, choice 1
#5	choice 1, choice 2
#6	choice 2, choice 3, choice 1
#7	choice 3, choice 2, choice 1
#8	choice 2, choice 1
#9	choice 1, choice 2, choice 3
#10	choice 3, choice 2
#11	choice 2, choice 3, choice 1
#12	choice 2, choice 3