



#1



Which picture shows $3 + 6 = 9$?



Show your work

#2



Which picture shows $8 + 2 = 10$?



Show your work

#3



Which picture shows $9 + 1 = 10$?



Show your work

#4


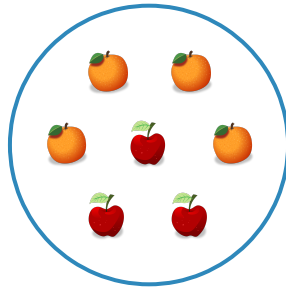
Which picture shows $1 + 4 = 5$?

☐☐

Show your work

#5



Which picture shows $3 + 4 = 7$?

☐☐

Show your work

#6



Which picture shows $6 + 2 = 8$?

☐☐

Show your work

#7



Which picture shows $1 + 3 = 4$?


☐

☐

Show your work

#8



Which picture shows $1 + 7 = 8$?


☐

☐

Show your work

#9



Which picture shows $4 + 3 = 7$?


☐

☐

Show your work

#10



Which picture shows $6 + 3 = 9$?


☐

☐

Show your work

#11



Which picture shows $5 + 2 = 7$?


☐

☐

Show your work

#12

Which picture shows $3 + 2 = 5$?


☐

☐

Show your work

Question	Answer
#1	choice 1
#2	choice 1
#3	choice 1
#4	choice 2
#5	choice 2
#6	choice 2
#7	choice 2
#8	choice 2
#9	choice 1
#10	choice 1
#11	choice 1
#12	choice 2