




#1

What kind of shape is this?



- ☐ parallelogram ☐ cone ☐ triangle

Show your work

#2

What kind of shape is this?



- ☐ triangle ☐ rectangular prism ☐ parallelogram

Show your work

#3

What kind of shape is this?




- ☐ triangular pyramid ☐ parallelogram ☐ rectangle

Show your work



#4

What kind of shape is this?



- ☐ square ☐ triangle ☐ rectangle

Show your work

#5

What kind of shape is this?




- ☐ hexagon ☐ triangle ☐ rectangle

Show your work

#6

What kind of shape is this?



- ☐ triangular prism ☐ rectangular prism ☐ pentagon

Show your work



#7

What kind of shape is this?



- ☐ parallelogram ☐ hexagon ☐ cylinder

Show your work

#8

What kind of shape is this?




- ☐ cylinder ☐ triangle ☐ pentagon

Show your work

#9

What kind of shape is this?




- ☐ triangular pyramid ☐ triangle ☐ pentagon

Show your work



#10

What kind of shape is this?



- ☐ rectangle ☐ triangle ☐ hexagon

Show your work

#11

What kind of shape is this?




- ☐ rectangle ☐ cone ☐ rectangular pyramid

Show your work

#12

What kind of shape is this?



- ☐ triangular pyramid ☐ rectangular prism ☐ triangle

Show your work

Question	Answer
#1	choice 3
#2	choice 3
#3	choice 3
#4	choice 1
#5	choice 3
#6	choice 1
#7	choice 1
#8	choice 2
#9	choice 3
#10	choice 2
#11	choice 3
#12	choice 3