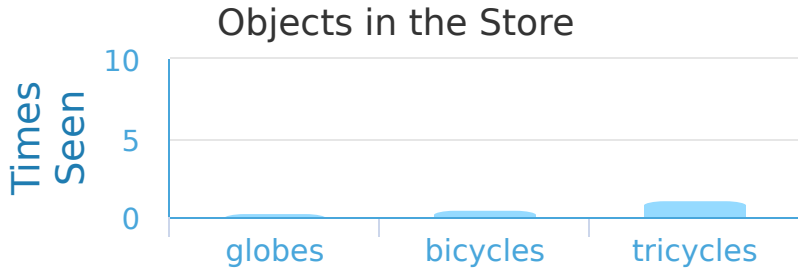


#1

While at the store Ryan made a bar graph of all the things that he'd seen. How many more tricycles than bicycles did Ryan see?



- 3 more
- 5 more
- 4 more
- 2 more

Show your work

#2

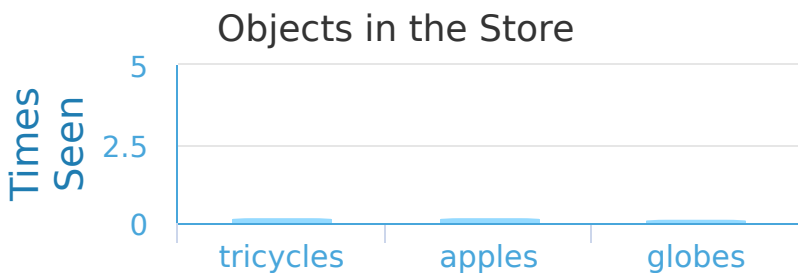
While at the store Lily made a bar graph of all the things that she'd seen. Did Lily see more apples or globes?



Show your work

#3

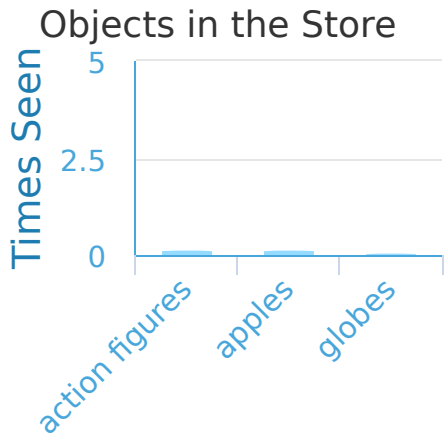
While at the store Isabella made a bar graph of all the things that she'd seen. How many more apples than tricycles did Isabella see?



- 2 more
- 0 more
- 1 more
- 3 more

Show your work

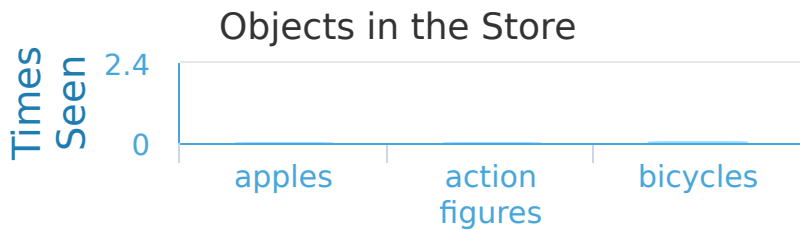
#4 While at the store Alexander made a bar graph of all the things that he'd seen. How many more action figures than apples did Alexander see?



more

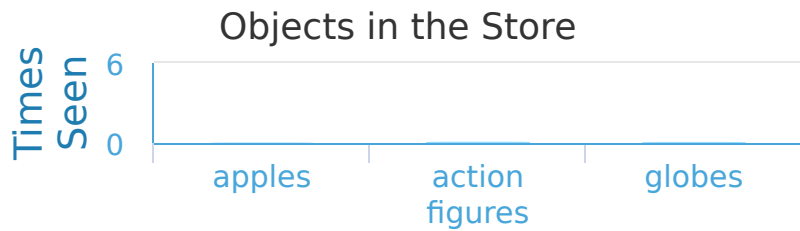
Show your work

#5 While at the store Kaitlyn made a bar graph of all the things that she'd seen. Did Kaitlyn see more bicycles or action figures?



Show your work

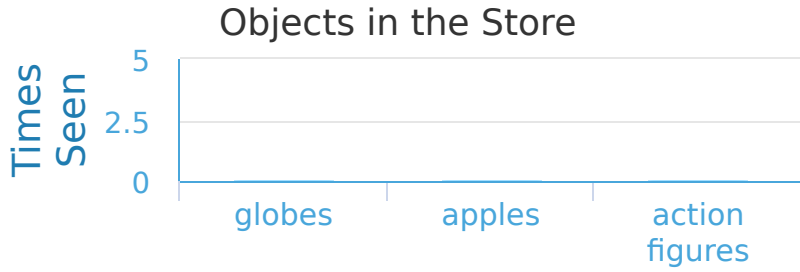
#6 While at the store Hailey made a bar graph of all the things that she'd seen. Which things did Hailey see most?



Show your work

#7

While at the store Anna made a bar graph of all the things that she'd seen. How many more apples than action figures did Anna see?

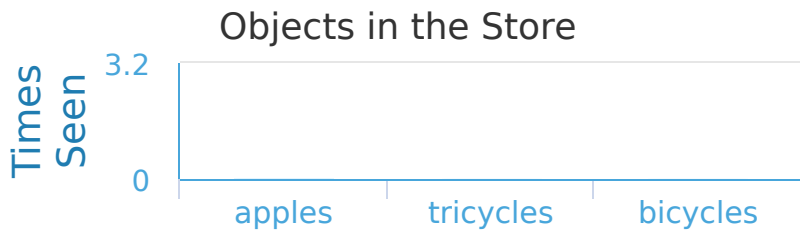


- 0 more
- 2 more
- 3 more
- 1 more

Show your work

#8

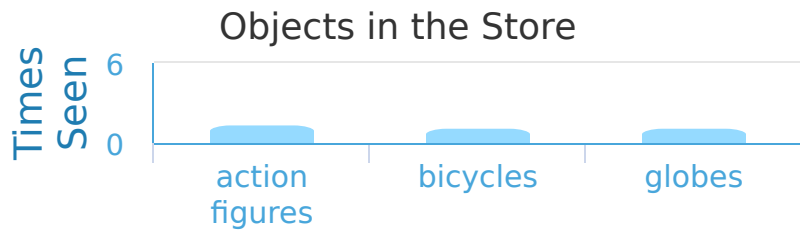
While at the store Gavin made a bar graph of all the things that he'd seen. Did Gavin see more tricycles or apples?



Show your work

#9

While at the store Hannah made a bar graph of all the things that she'd seen. Did Hannah see more bicycles or action figures?

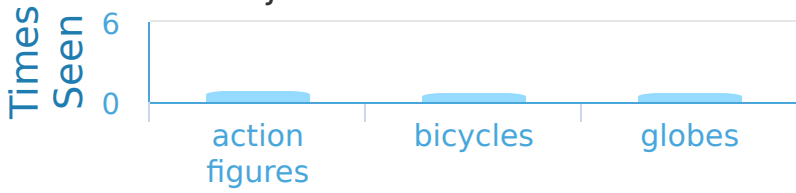


Show your work

#10

While at the store Hannah made a bar graph of all the things that she'd seen. Did Hannah see more bicycles or action figures?

Objects in the Store

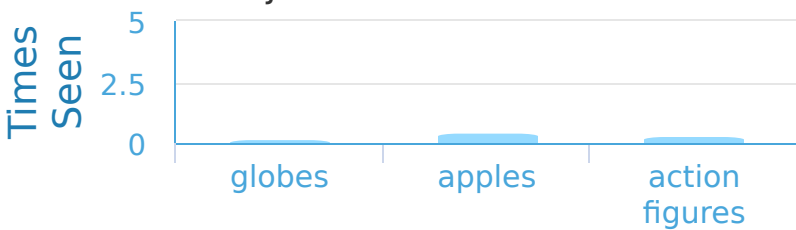


Show your work

#11

While at the store Sophia made a bar graph of all the things that she'd seen. How many more apples than globes did Sophia see?

Objects in the Store



1 more

5 more

2 more

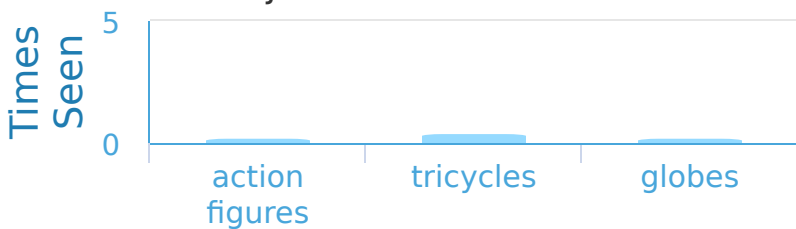
3 more

Show your work

#12

While at the store Madison made a bar graph of all the things that she'd seen. How many more action figures than globes did Madison see?

Objects in the Store



1 more

3 more

2 more

0 more

Show your work

Question	Answer
#1	choice 1
#2	choice 1
#3	choice 2
#4	0
#5	choice 2
#6	choice 2
#7	choice 1
#8	choice 2
#9	choice 2
#10	choice 2
#11	choice 3
#12	choice 4