

**#1** Gavin frequently flies for business. He made a chart of the number of flights made each month. Use the data below to complete the pictograph.

Flights Made

Month	January	Febuary	March
Flights	5	7	1




Show your work

**#2** The grade 4 class at Logan Elementary School made a chart of the number of presents each of them gave for Christmas. Use the data below to complete the pictograph.

Presents Given

Name	Cameron	Ava	Brayden
Number	3	6	8




Show your work

**#3** Joshua made a table of the baskets he made at practice. Use the data below to complete the pictograph.

Baskets made

Day	Monday	Tuesday	Wednesday
Baskets	1	10	3




Show your work

#4

Jack is covered in ants. The table below shows where on his body the ants are located. Use the data below to complete the pictograph.

Ant Location			
Location	Arm	Stomach	Leg
Number of Ants	5	0	7




Show your work

#5

Caleb lives in the rainy city of Vancouver. He made a chart of the number of times he had to use an umbrella each month. Use the data below to complete the pictograph.

Umbrellas Used Each Month			
Month	January	February	March
Umbrellas	6	5	10




Show your work

#6

Matilda is a referee for a football league. She made a chart of the number of penalties she has given each team. Use the data below to complete the pictograph.

Penalties Given			
Team Name	Predators	Blue Bombers	Marauders
Penalties	10	6	10



Show your work

#7

Landon frequently flies for business. He made a chart of the number of flights made each month. Use the data below to complete the pictograph.

Month	January	Febuary	March
Flights	4	8	3




Show your work

#8

At Natalie Elementary School students in the grade 2 class compare the number of action figures owned. Use the data below to complete the pictograph.

Name	Samantha	Emma	Avery
Number	8	4	1



Show your work

#9

Ashley frequently flies for business. She made a chart of the number of flights made each month. Use the data below to complete the pictograph.

Month	January	Febuary	March
Flights	8	6	8



Show your work

#10

Evan frequently flies for business. He made a chart of the number of flights made each month. Use the data below to complete the pictograph.

Month	January	Febuary	March
Flights	5	4	7



Show your work

#11

While playing musical chairs, a chart was made for how many chairs several of the kids sat in before they were eliminated. Use the data below to complete the pictograph.

Name	Owen	Aiden	Benjamin
Chairs	7	1	8




Show your work

#12

Gabriel made a table of the number tigers he saw on safari. Use the data below to complete the pictograph.

Day	Monday	Tuesday	Wednesday
Tigers	2	8	4



Show your work

Question	Answer
#1	5, 7, 1
#2	3, 6, 8
#3	1, 10, 3
#4	5, 0, 7
#5	6, 5, 10
#6	10, 6, 10
#7	4, 8, 3
#8	8, 4, 1
#9	8, 6, 8
#10	5, 4, 7
#11	7, 1, 8
#12	2, 8, 4