



#1

What is the area of this shape? Every square represents one unit square.




unit squares

Show your work

#2

What is the area of this shape? Every square represents one unit square.




- 4 units
- 0 units
- 2 units
- 3 units

Show your work

#3

What is the area of this shape? Every square represents one unit square.




- 6 units
- 2 units
- 3 units
- 5 units

Show your work



#4

What is the area of this shape? Every square represents one unit square.



- 5 units
- 2 units
- 4 units
- 7 units

Show your work

#5

What is the area of this shape? Every square represents one unit square.



unit squares

Show your work

#6

What is the area of this shape? Every square represents one unit square.




unit squares

Show your work



#7

What is the area of this shape? Every square represents one unit square.



- 0 units
- 3 units
- 5 units
- 2 units

Show your work

#8

What is the area of this shape? Every square represents one unit square.




unit squares

Show your work

#9

What is the area of this shape? Every square represents one unit square.



unit squares

Show your work



#10

What is the area of this shape? Every square represents one unit square.



unit squares

Show your work

#11

What is the area of this shape? Every square represents one unit square.



- 2 units
- 3 units
- 0 units
- 5 units

Show your work

#12

What is the area of this shape? Every square represents one unit square.



unit squares

Show your work

Question	Answer
#1	5
#2	choice 4
#3	choice 3
#4	choice 3
#5	3
#6	5
#7	choice 4
#8	3
#9	2
#10	3
#11	choice 1
#12	3