




#1

What is the perimeter of this figure?

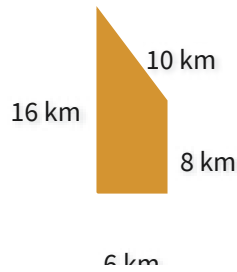


- 33
- 30
- 31
- 34

Show your work

#2

What is the perimeter of this figure?

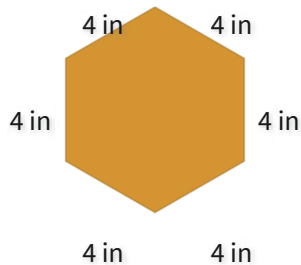


- 50
- 40
- 51
- 30

Show your work

#3

What is the perimeter of this figure?



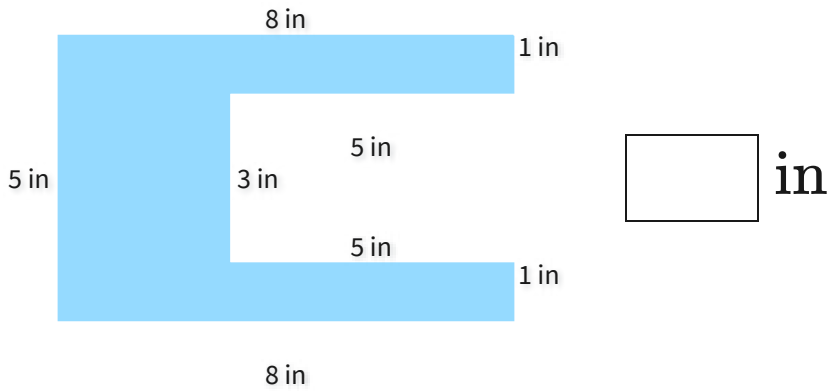
- 19
- 24
- 28
- 16

Show your work



#4

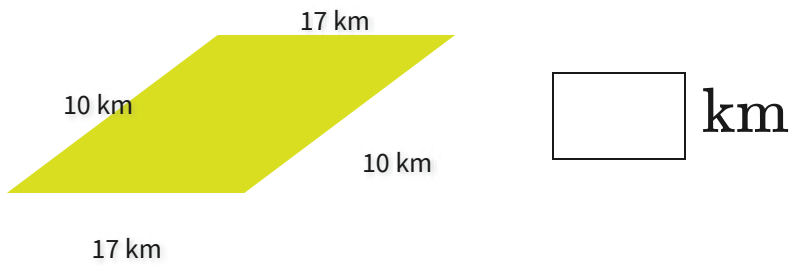
What is the perimeter of this figure?



Show your work

#5

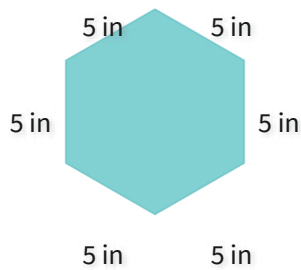
What is the perimeter of this figure?



Show your work

#6

What is the perimeter of this figure?



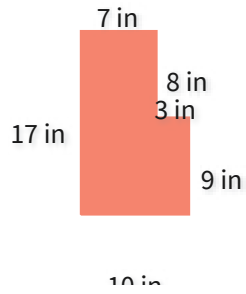
- 37
- 24
- 21
- 30

Show your work



#7

What is the perimeter of this figure?

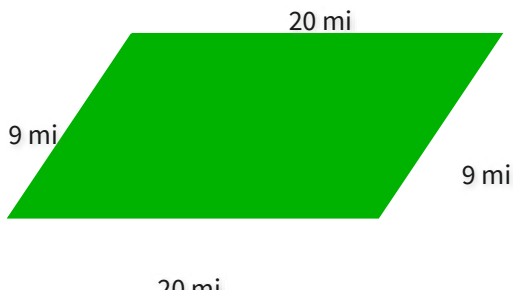


- 47
- 54
- 68
- 57

Show your work

#8

What is the perimeter of this figure?

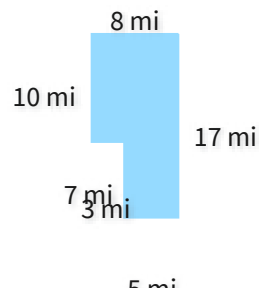


- 67
- 53
- 58
- 66

Show your work

#9

What is the perimeter of this figure?



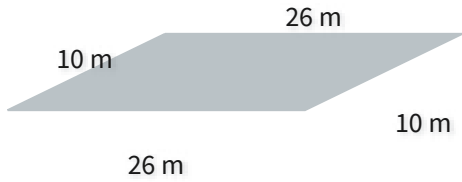
- 65
- 62
- 37
- 50

Show your work



#10

What is the perimeter of this figure?

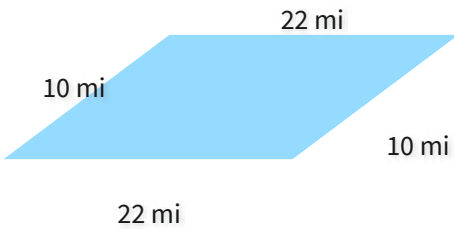


m

Show your work

#11

What is the perimeter of this figure?

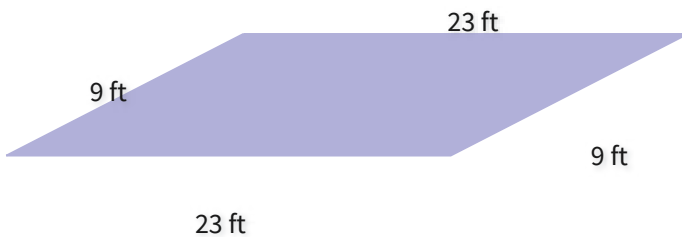


mi

Show your work

#12

What is the perimeter of this figure?



62

59

64

65

Show your work

Question	Answer
#1	30
#2	40
#3	24
#4	36
#5	54
#6	30
#7	54
#8	58
#9	50
#10	72
#11	64
#12	64