


#1

Find the value of x if the perimeter of the figure is 32 mm.

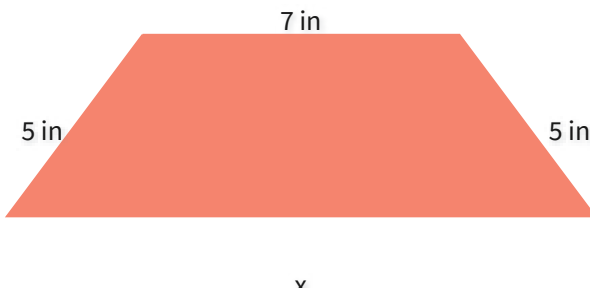


- 8 mm
- 3 mm
- 5 mm
- 7 mm

Show your work

#2

Find the value of x if the perimeter of the figure is 30 in.

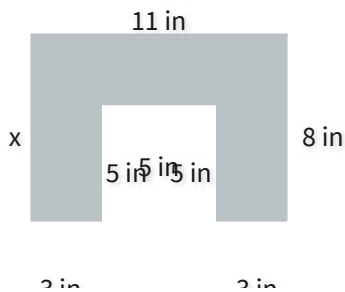


- 13 in
- 14 in
- 11 in
- 17 in

Show your work

#3

Find the value of x if the perimeter of the figure is 48 in.

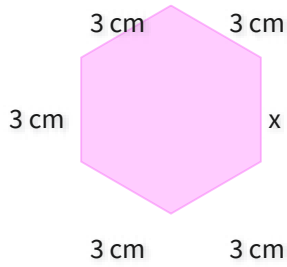


- 9 in
- 8 in
- 10 in
- 6 in

Show your work

#4

Find the value of x if the perimeter of the figure is 18 cm.




- 6 cm
- 3 cm
- 0 cm
- 2 cm

Show your work

#5

Find the value of x if the perimeter of the figure is 46 ft.

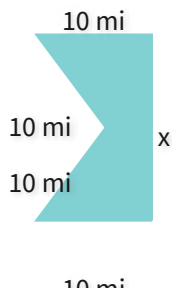


- 22 ft
- 13 ft
- 18 ft
- 12 ft

Show your work

#6

Find the value of x if the perimeter of the figure is 56 mi.

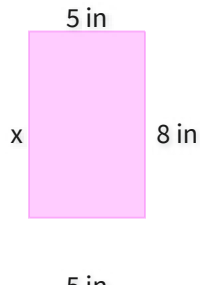


- 17 mi
- 16 mi
- 19 mi
- 15 mi

Show your work

#7

Find the value of x if the perimeter of the figure is 26 in.

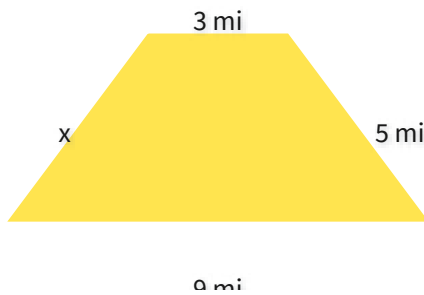


- 11 in
- 8 in
- 5 in
- 7 in

Show your work

#8

Find the value of x if the perimeter of the figure is 22 mi.

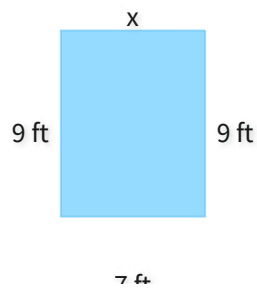


- 5 mi
- 8 mi
- 3 mi
- 4 mi

Show your work

#9

Find the value of x if the perimeter of the figure is 32 ft.

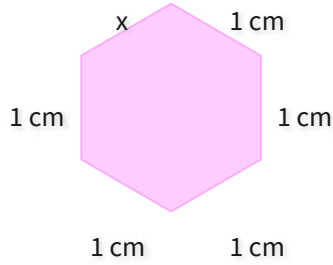


- 7 ft
- 4 ft
- 5 ft
- 8 ft

Show your work

#10

Find the value of x if the perimeter of the figure is 6 cm.

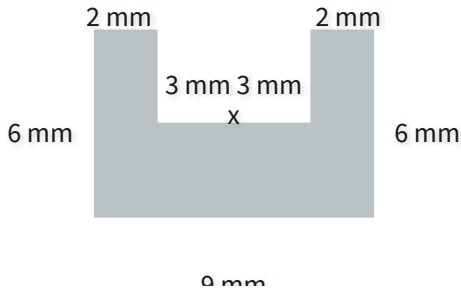


- 1 cm
- 0 cm
- 3 cm
- 4 cm

Show your work

#11

Find the value of x if the perimeter of the figure is 36 mm.

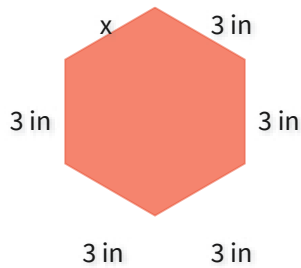


- 4 mm
- 3 mm
- 8 mm
- 5 mm

Show your work

#12

Find the value of x if the perimeter of the figure is 18 in.



- 5 in
- 6 in
- 1 in
- 3 in

Show your work

Question	Answer
#1	choice 3
#2	choice 1
#3	choice 2
#4	choice 2
#5	choice 3
#6	choice 2
#7	choice 2
#8	choice 1
#9	choice 1
#10	choice 1
#11	choice 4
#12	choice 4