

#1

Which shape has 4 equal sides?

Rhombus Pentagon Equilateral Triangle

Show your work

#2

Which shape has 2 acute angles and 2 obtuse angles?

Trapezoid Square Rectangle

Show your work

#3



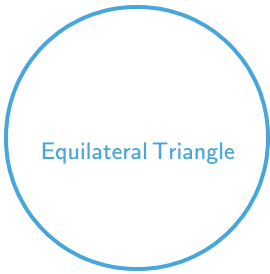
Which shape has 2 acute angles, 2 obtuse angles, and 4 equal sides?

Trapezoid Rectangle Rhombus

Show your work

#4


Which shape has 3 equal angles?



Show your work

#5


Which shape has 4 right angles?



Show your work

#6



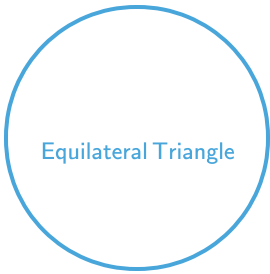
Which shape has 5 angles?



Show your work

#7



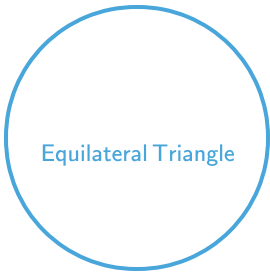
Which shape has 3 equal angles?



Show your work

#8



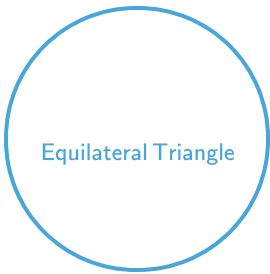
Which shape has 3 equal angles?



Show your work

#9

Which shape has 3 equal sides?



Show your work

#10

Which shape has 3 sides?

Square

Pentagon

Equilateral Triangle

Show your work

#11

Which shape has 3 equal angles?

Right Triangle

Rhombus

Equilateral Triangle

Show your work

#12

Which shape has 2 acute angles and 2 obtuse angles?

Rectangle

Trapezoid

Square

Show your work

Question	Answer
#1	choice 1
#2	choice 1
#3	choice 3
#4	choice 1
#5	choice 1
#6	choice 3
#7	choice 1
#8	choice 1
#9	choice 1
#10	choice 3
#11	choice 3
#12	choice 2