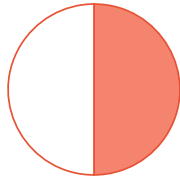


#1

What fraction of the shape is filled?



$\frac{1}{10}$

$\frac{1}{3}$

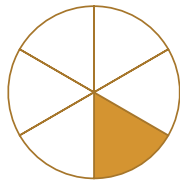
$\frac{1}{5}$

$\frac{1}{2}$

Show your work

#2

What fraction of the shape is filled?



$\frac{1}{6}$

$\frac{1}{4}$


$\frac{1}{2}$

$\frac{1}{3}$

Show your work

#3

What fraction of the shape is filled?



$\frac{1}{5}$

$\frac{1}{8}$

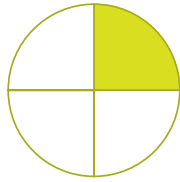
$\frac{1}{2}$

$\frac{1}{9}$

Show your work

#4

What fraction of the shape is filled?



$\frac{1}{8}$

$\frac{1}{2}$


$\frac{1}{4}$

$\frac{1}{10}$

Show your work

#5

What fraction of the shape is filled?



$\frac{1}{10}$

$\frac{1}{6}$


$\frac{1}{4}$

$\frac{1}{8}$

Show your work

#6

What fraction of the shape is filled?



$\frac{1}{8}$

$\frac{1}{5}$

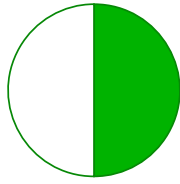
$\frac{1}{3}$

$\frac{1}{2}$

Show your work

#7

What fraction of the shape is filled?



$\frac{1}{3}$

$\frac{1}{9}$

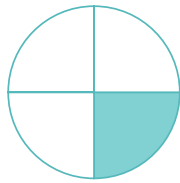
$\frac{1}{2}$

$\frac{1}{10}$

Show your work

#8

What fraction of the shape is filled?



$\frac{1}{4}$

$\frac{1}{10}$

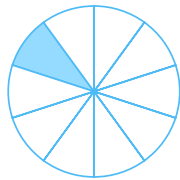
$\frac{1}{9}$

$\frac{1}{6}$

Show your work

#9

What fraction of the shape is filled?



$\frac{1}{2}$

$\frac{1}{5}$

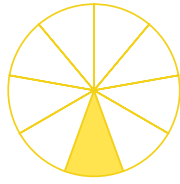
$\frac{1}{7}$

$\frac{1}{10}$

Show your work

#10

What fraction of the shape is filled?



$\frac{1}{9}$

$\frac{1}{2}$

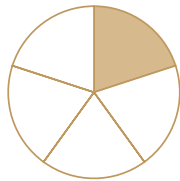
$\frac{1}{7}$

$\frac{1}{8}$

Show your work

#11

What fraction of the shape is filled?



$\frac{1}{8}$

$\frac{1}{5}$


$\frac{1}{9}$

$\frac{1}{3}$

Show your work

#12

What fraction of the shape is filled?



$\frac{1}{2}$

$\frac{1}{9}$

$\frac{1}{6}$

$\frac{1}{8}$

Show your work

Question	Answer
#1	choice 4
#2	choice 1
#3	choice 3
#4	choice 3
#5	choice 1
#6	choice 1
#7	choice 3
#8	choice 1
#9	choice 4
#10	choice 1
#11	choice 2
#12	choice 1