



#1 Each square represents 1 m^2 . What is the area of this shape?



m^2

Show your work


#2 Each square represents 1 km^2 . What is the area of this shape?



km^2

Show your work

#3 Each square represents 1 km^2 . What is the area of this shape?



4 km


2 km

0 km

5 km

Show your work


#4 Each square represents 1 mm^2 . What is the area of this shape?



mm^2

Show your work

#5 Each square represents 1 dm^2 . What is the area of this shape?



4 dm

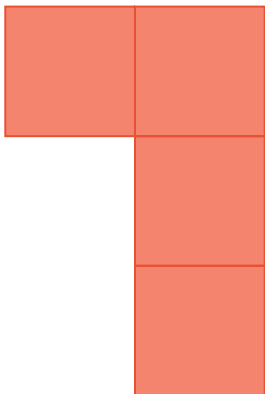
1 dm

0 dm

2 dm

Show your work

#6 Each square represents 1 m^2 . What is the area of this shape?



m^2

Show your work

#7 Each square represents 1 mm^2 . What is the area of this shape?



- 1 mm
- 2 mm
- 0 mm
- 3 mm

Show your work


#8 Each square represents 1 m^2 . What is the area of this shape?



m^2

Show your work

#9 Each square represents 1 dm^2 . What is the area of this shape?



dm^2

Show your work

#10

Each square represents 1 yd². What is the area of this shape?



yd²

Show your work

#11

Each square represents 1 mi². What is the area of this shape?



3 mi

2 mi

4 mi

0 mi

Show your work

#12

Each square represents 1 yd². What is the area of this shape?



5 yd

1 yd

2 yd

4 yd

Show your work

Question	Answer
#1	1
#2	2
#3	choice 2
#4	3
#5	choice 4
#6	4
#7	choice 3
#8	3
#9	2
#10	3
#11	choice 2
#12	choice 3