

#1

Look at this clock. What time will it be in 2 hours? (EX: 12:00)



- 8:00                       9:00  
 6:00                       12:00

Show your work

#2

Look at this clock. What time will it be in 2 hours? (EX: 12:00)



- 3:00                       6:00  
 4:00                       1:00

Show your work

#3


Look at this clock. What time will it be in 1 hour? (EX: 12:00)




Show your work

#4

It is now 12:00. What time will it be in 2 hours?  
(EX: 12:00)



2:00

4:00

5:00

1:00

Show your work

#5

Look at this clock. What time will it be in 2 hours? (EX: 12:00)



8:00

9:00


6:00

12:00

Show your work

#6

Look at this clock. What time will it be in 3 hours? (EX: 12:00)



2:00

5:00

4:00

3:00

Show your work

#7 It is now 8:00. What time will it be in 3 hours?  
(EX: 12:00)



- 11:00                       12:00  
 8:00                             10:00


Show your work

#8 Look at this clock. What time will it be in 2 hours? (EX: 12:00)




Show your work

#9 Look at this clock. What time will it be in 1 hour? (EX: 12:00)




Show your work

#10

Look at this clock. What time will it be in 2 hours? (EX: 12:00)



Show your work

#11

It is now 4:00. What time will it be in 1 hour? (EX: 12:00)



3:00

5:00

7:00

2:00

Show your work

#12

It is now 10:00. What time will it be in 2 hours? (EX: 12:00)



Show your work

Question	Answer
#1	choice 2
#2	choice 1
#3	10:00
#4	choice 1
#5	choice 2
#6	choice 1
#7	choice 1
#8	3:00
#9	1:00
#10	1:00
#11	choice 2
#12	12:00