

#1

Choose the missing time.

6:00 8:00 ??:?? 12:00

2:15

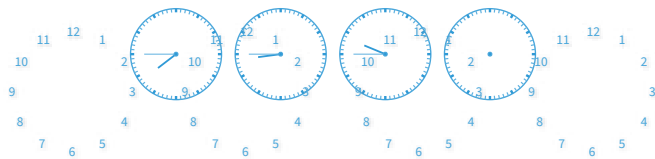
10:00



Show your work

#2

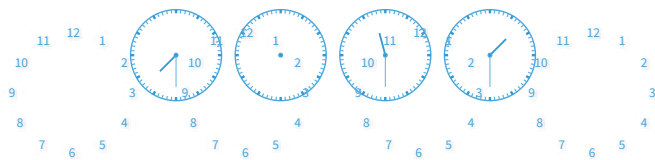
Choose the missing time.



Show your work

#3

Choose the missing time.



Show your work

#4

Choose the missing time.

1:15 2:15 3:15 4:15

9:45

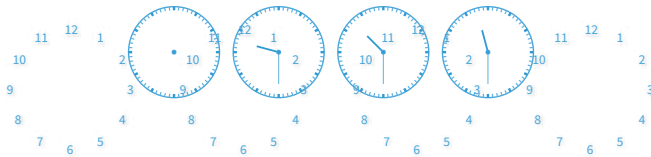
3:15



Show your work

#5

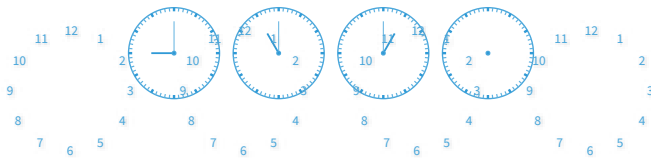
Choose the missing time.



Show your work

#6


Choose the missing time.



Show your work

#7


Choose the missing time.



Show your work

#8

Choose the missing time.



Show your work

#9

Choose the missing time.

??:?? 12:15 1:15 2:15

10:15



11:15



Show your work

#10

Choose the missing time.

7:30 9:30 1:30

11:30

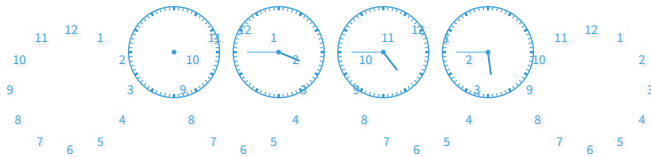
5:30



Show your work

#11

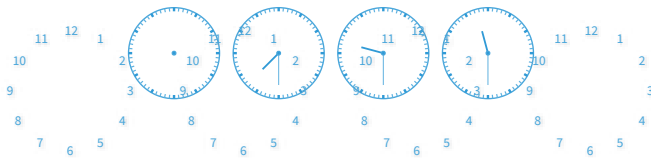
Choose the missing time.



Show your work

#12

Choose the missing time.



Show your work

Question	Answer
#1	choice 2
#2	choice 2
#3	choice 2
#4	choice 2
#5	choice 1
#6	choice 1
#7	choice 1
#8	choice 1
#9	choice 2
#10	choice 1
#11	choice 2
#12	choice 2