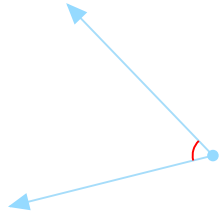


#1

Is this angle acute, right, obtuse, or straight?



- Straight
- Acute
- Right
- Obtuse

Show your work

#2

Is this angle acute, right, obtuse, or straight?



- Acute
- Straight
- Right
- Obtuse

Show your work

#3

Is this angle acute, right, obtuse, or straight?



- Right
- Acute
- Straight
- Obtuse

Show your work

#4

Is this angle acute, right, obtuse, or straight?

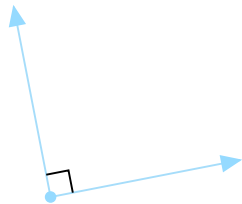


- Acute
- Right
- Obtuse
- Straight

Show your work

#5

Is this angle acute, right, obtuse, or straight?

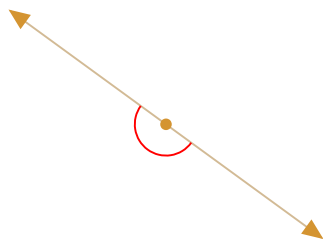


- Right
- Acute
- Straight
- Obtuse

Show your work

#6

Is this angle acute, right, obtuse, or straight?

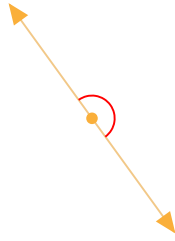


- Straight
- Acute
- Obtuse
- Right

Show your work

#7

Is this angle acute, right, obtuse, or straight?



- Straight
- Acute
- Right
- Obtuse

Show your work

#8

Is this angle acute, right, obtuse, or straight?

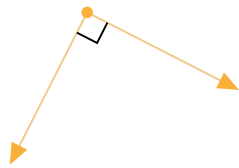


- Acute
- Right
- Obtuse
- Straight

Show your work

#9

Is this angle acute, right, obtuse, or straight?

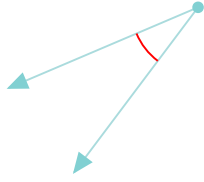


- Straight
- Right
- Acute
- Obtuse

Show your work

#10

Is this angle acute, right, obtuse, or straight?

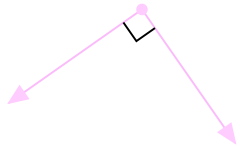


- Straight
- Right
- Obtuse
- Acute

Show your work

#11

Is this angle acute, right, obtuse, or straight?

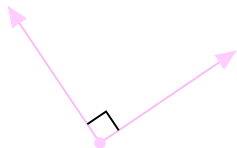


- Obtuse
- Acute
- Right
- Straight

Show your work

#12

Is this angle acute, right, obtuse, or straight?



- Right
- Straight
- Obtuse
- Acute

Show your work

Question	Answer
#1	choice 2
#2	choice 4
#3	choice 4
#4	choice 4
#5	choice 1
#6	choice 1
#7	choice 1
#8	choice 2
#9	choice 3
#10	choice 4
#11	choice 3
#12	choice 1