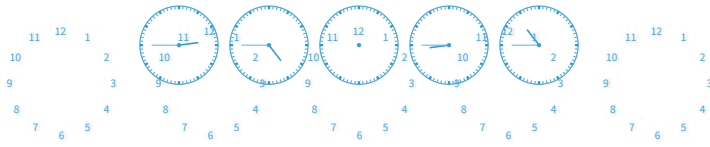


#1

Choose the missing time.



Show your work

#2

Choose the missing time.

??:?? 2:30 3:30 4:30 5:30

1:30



6:15



Show your work

#3

Choose the missing time.

1:00 2:00 ??:?? 4:00 5:00

1:45




3:00



Show your work

#4

Choose the missing time.






Show your work

#5

Choose the missing time.

8:30          9:30   10:30   ??:??   12:30

11:30

8:45

Show your work

#6

Choose the missing time.

10:15          12:15   2:15   4:15   ??:??

6:15

5:15

Show your work

#7

Choose the missing time.

4:45   6:45   ??:??   10:45   12:45

8:45

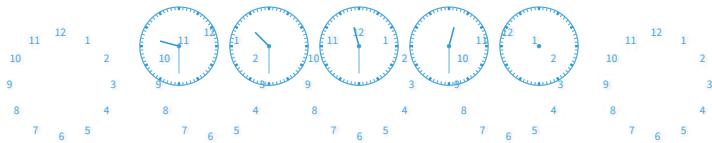
4:00



Show your work

#8

Choose the missing time.



Show your work

#9

Choose the missing time.

??:??   12:15   2:15   4:15   6:15

12:15

10:15



Show your work

#10

Choose the missing time.

??:?? 12:15 2:15 4:15 6:15

12:15

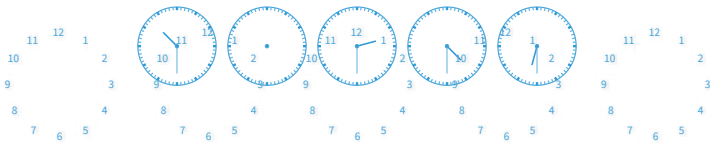
10:15



Show your work

#11

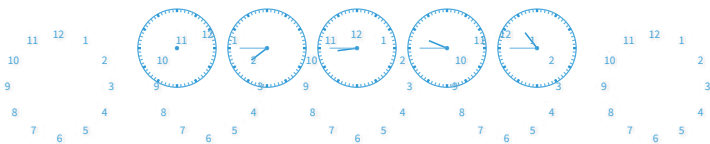
Choose the missing time.



Show your work

#12

Choose the missing time.



Show your work

Question	Answer
#1	choice 2
#2	choice 1
#3	choice 2
#4	choice 2
#5	choice 1
#6	choice 1
#7	choice 1
#8	choice 2
#9	choice 2
#10	choice 2
#11	choice 1
#12	choice 1