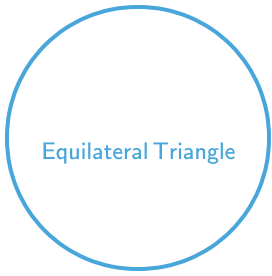



#1



Which shape has 3 corners?



Show your work

#2


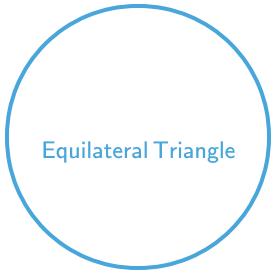
Which shape has 2 acute angles, 2 obtuse angles, and 4 equal sides?



Show your work

#3

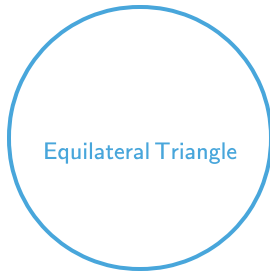


Which shape has 3 sides?



Show your work

#4



Which shape has 3 equal sides?



Show your work

#5



Which shape has 2 acute angles, 2 obtuse angles, and 4 equal sides?



Show your work




#6

Which shape has 2 acute angles and 2 obtuse angles?






Show your work

#7 Which shape has 2 acute angles and 2 obtuse angles?

 <input type="radio"/>	 <input type="radio"/>	 <input type="radio"/>
---	--	--

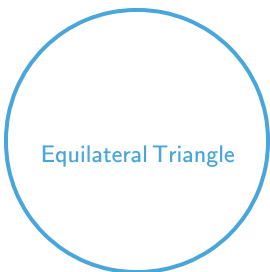
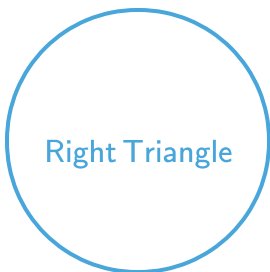

Show your work

#8 Which shape has 4 right angles?

 <input type="radio"/>	 <input type="radio"/>	 <input type="radio"/>
--	---	---

Show your work

#9 Which shape has 3 equal sides?

 <input type="radio"/>	 <input type="radio"/>	 <input type="radio"/>
---	--	--

Show your work

#10

Which shape has 2 acute angles, 2 obtuse angles, and 4 equal sides?

Rhombus Rectangle Trapezoid

Show your work

#11

Which shape has 3 equal angles?

Rhombus Right Triangle Equilateral Triangle

Show your work

#12

Which shape has 4 right angles?

Pentagon Square Trapezoid

Show your work

Question	Answer
#1	choice 2
#2	choice 3
#3	choice 2
#4	choice 3
#5	choice 3
#6	choice 3
#7	choice 3
#8	choice 1
#9	choice 1
#10	choice 1
#11	choice 3
#12	choice 2