



#1

Each square represents 1 in. What is the perimeter of this shape?



in

Show your work

#2

Each square represents 1 yd. What is the perimeter of this shape?



6 yd

8 yd

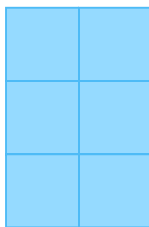
3 yd

7 yd

Show your work

#3

Each square represents 1 km. What is the perimeter of this shape?



7 km

10 km

13 km


8 km

Show your work



#4

Each square represents 1 ft. What is the perimeter of this shape?




ft

Show your work

#5

Each square represents 1 in. What is the perimeter of this shape?



18 in

14 in

16 in

13 in

Show your work

#6

Each square represents 1 in. What is the perimeter of this shape?



in

Show your work



#7

Each square represents 1 mm. What is the perimeter of this shape?




- 11 mm
- 10 mm
- 7 mm
- 12 mm

Show your work

#8

Each square represents 1 m. What is the perimeter of this shape?




m

Show your work

#9

Each square represents 1 in. What is the perimeter of this shape?




- 18 in
- 14 in
- 16 in
- 13 in

Show your work



#10

Each square represents 1 cm. What is the perimeter of this shape?




cm

Show your work

#11

Each square represents 1 km. What is the perimeter of this shape?



8 km

7 km

5 km

11 km

Show your work

#12

Each square represents 1 ft. What is the perimeter of this shape?



13 ft

14 ft

12 ft

15 ft

Show your work

| Question | Answer |
|----------|----------|
| #1 | 8 |
| #2 | choice 1 |
| #3 | choice 2 |
| #4 | 4 |
| #5 | choice 3 |
| #6 | 8 |
| #7 | choice 2 |
| #8 | 16 |
| #9 | choice 3 |
| #10 | 6 |
| #11 | choice 1 |
| #12 | choice 3 |