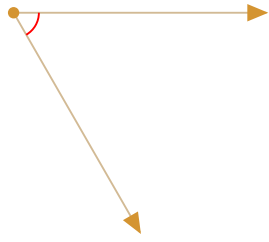


#1

What is the measurement of this angle?
Choose the best estimate.



- 5 degrees
- 30 degrees
- 60 degrees
- 90 degrees

Show your work

#2

What is the measurement of this angle?
Choose the best estimate.

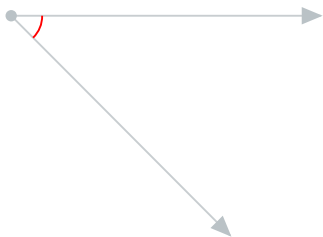


- 15 degrees
- 60 degrees
- 90 degrees
- 45 degrees

Show your work

#3

What is the measurement of this angle?
Choose the best estimate.

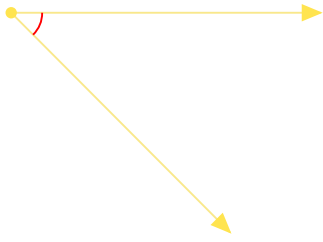


- 45 degrees
- 5 degrees
- 15 degrees
- 90 degrees

Show your work

#4

What is the measurement of this angle?
Choose the best estimate.




- 15 degrees
- 5 degrees
- 45 degrees
- 90 degrees

Show your work

#5

What is the measurement of this angle?
Choose the best estimate.

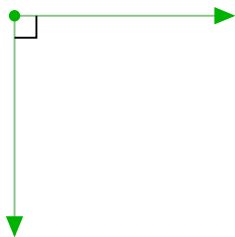


- 60 degrees
- 15 degrees
- 45 degrees
- 90 degrees

Show your work

#6

What is the measurement of this angle?
Choose the best estimate.

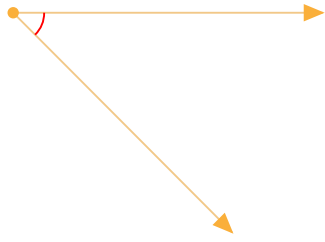


- 30 degrees
- 90 degrees
- 45 degrees
- 15 degrees

Show your work

#7

What is the measurement of this angle?
Choose the best estimate.




- 15 degrees
- 5 degrees
- 90 degrees
- 45 degrees

Show your work

#8

What is the measurement of this angle?
Choose the best estimate.

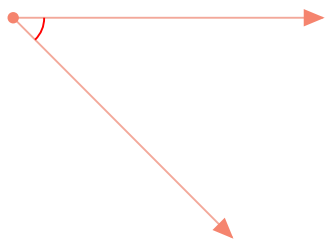


- 15 degrees
- 90 degrees
- 45 degrees
- 60 degrees

Show your work

#9

What is the measurement of this angle?
Choose the best estimate.




- 5 degrees
- 15 degrees
- 90 degrees
- 45 degrees

Show your work

#10

What is the measurement of this angle?
Choose the best estimate.

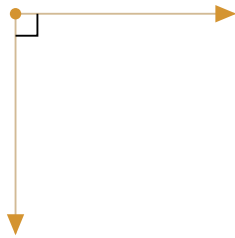


- 60 degrees
- 15 degrees
- 45 degrees
- 90 degrees

Show your work

#11

What is the measurement of this angle?
Choose the best estimate.

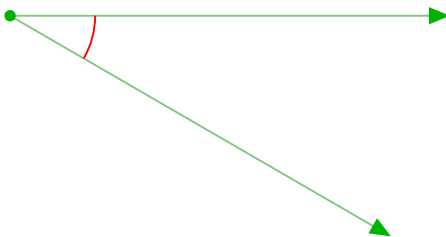


- 45 degrees
- 15 degrees
- 90 degrees
- 60 degrees

Show your work

#12

What is the measurement of this angle?
Choose the best estimate.



- 90 degrees
- 60 degrees
- 30 degrees
- 5 degrees

Show your work

Question	Answer
#1	choice 2
#2	choice 1
#3	choice 1
#4	choice 3
#5	choice 2
#6	choice 2
#7	choice 4
#8	choice 1
#9	choice 4
#10	choice 2
#11	choice 3
#12	choice 3