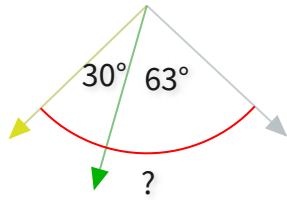


#1

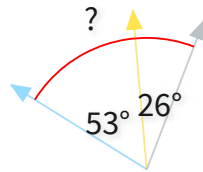
What is the value of a missing angle?

 °

Show your work

#2

What is the value of a missing angle?



83°

79°

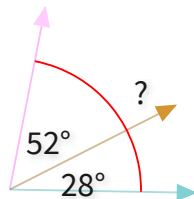
63°

92°

Show your work

#3

What is the value of a missing angle?



80°

65°

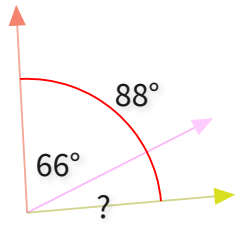
72°

97°

Show your work

#4

What is the value of a missing angle?



26°

22°

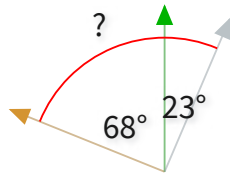
28°

17°

Show your work

#5

What is the value of a missing angle?



119°

91°

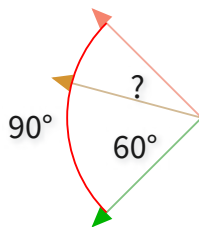
100°

78°

Show your work

#6

What is the value of a missing angle?



21°

30°

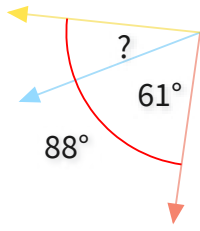
33°

24°

Show your work

#7

What is the value of a missing angle?



27°

35°

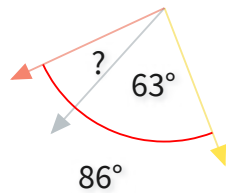
31°

32°

Show your work

#8

What is the value of a missing angle?



18°

30°

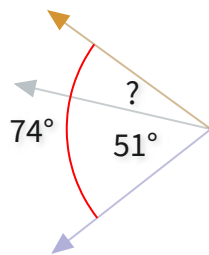
23°

25°

Show your work

#9

What is the value of a missing angle?

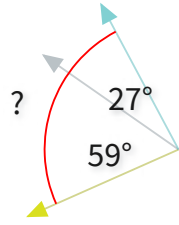


°

Show your work

#10

What is the value of a missing angle?



101°

69°

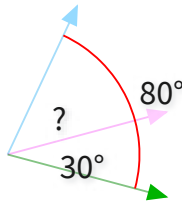
86°

60°

Show your work

#11

What is the value of a missing angle?



40°

50°

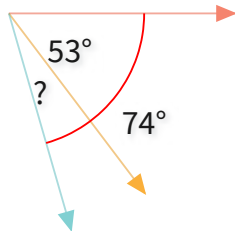
59°

51°

Show your work

#12

What is the value of a missing angle?



25°

16°

27°

21°

Show your work

Question	Answer
#1	93
#2	choice 2
#3	choice 1
#4	choice 2
#5	choice 2
#6	choice 2
#7	choice 1
#8	choice 3
#9	23
#10	choice 3
#11	choice 2
#12	choice 4