

#1

Is this shape open or closed?




Open

Closed

Show your work

#2

Is this shape open or closed?




Open

Closed

Show your work

#3

Is this shape open or closed?



Open


Closed

Show your work



#4

Is this shape open or closed?



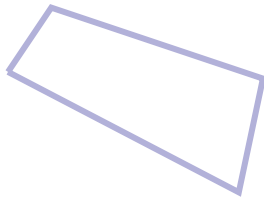
Open

Closed

Show your work

#5

Is this shape open or closed?




Open

Closed

Show your work

#6

Is this shape open or closed?



Closed

Open

Show your work

#7

Is this shape open or closed?



Open

Closed

Show your work

#8

Is this shape open or closed?




Closed

Open

Show your work

#9

Is this shape open or closed?



Closed


Open

Show your work



#10

Is this shape open or closed?



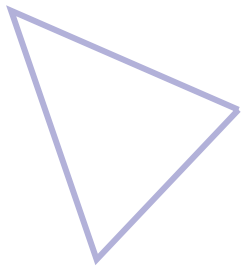
Open

Closed

Show your work

#11

Is this shape open or closed?




Open

Closed

Show your work

#12

Is this shape open or closed?



Closed

Open

Show your work

Question	Answer
#1	choice 1
#2	choice 2
#3	choice 2
#4	choice 1
#5	choice 2
#6	choice 2
#7	choice 1
#8	choice 1
#9	choice 2
#10	choice 2
#11	choice 2
#12	choice 1