

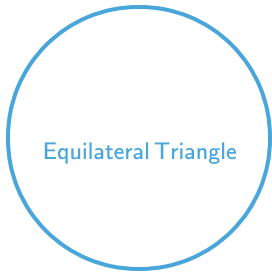


#1

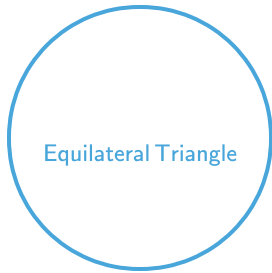


Which shape has 3 equal sides?



Show your work

#2


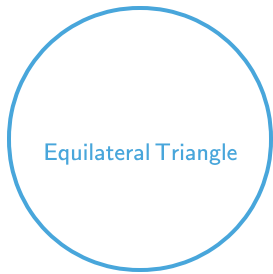
Which shape has 3 equal sides?



Show your work

#3

Which shape has 3 sides?



Show your work

#4

Which shape has 4 equal sides?

Rhombus Equilateral Triangle Pentagon

Show your work

#5

Which shape has 4 equal sides?

Equilateral Triangle Pentagon Rhombus

Show your work

#6



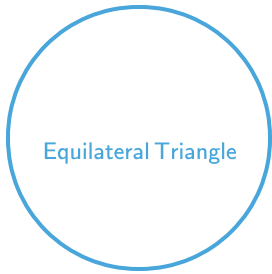
Which shape has 4 right angles?

Square Trapezoid Pentagon

Show your work

#7



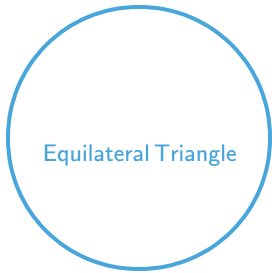
Which shape has 3 equal angles?



Show your work

#8

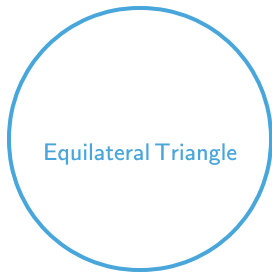

Which shape has 3 equal sides?



Show your work

#9

Which shape has 3 corners?



Show your work



#10

Which shape has 3 sides?

Pentagon

Square

Equilateral Triangle

Show your work

#11

Which shape has 3 equal sides?

Right Triangle

Equilateral Triangle

Rhombus

Show your work

#12

Which shape has 3 equal angles?

Rhombus

Equilateral Triangle

Right Triangle

Show your work

Question	Answer
#1	choice 1
#2	choice 3
#3	choice 2
#4	choice 1
#5	choice 3
#6	choice 1
#7	choice 1
#8	choice 1
#9	choice 3
#10	choice 3
#11	choice 2
#12	choice 2