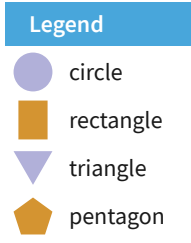
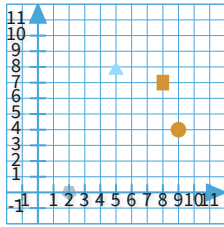


#1

What are the coordinates of the circle? Write your answer as whole numbers or decimals, rounded to the nearest 0.5.



(9,4)

(5,8)

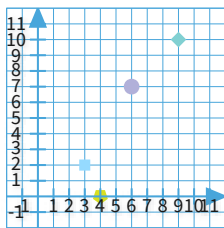
(2,0)

(8,7)

Show your work

#2

What are the coordinates of the circle? Write your answer as whole numbers or decimals, rounded to the nearest 0.5.



(9,10)

(6,7)

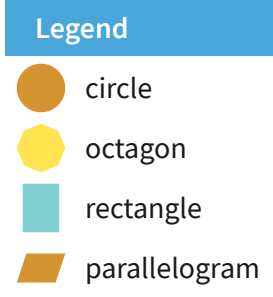
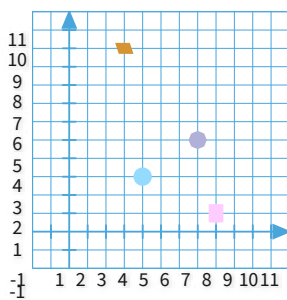
(4,0)

(3,2)

Show your work

#3

What are the coordinates of the circle? Write your answer as whole numbers or decimals, rounded to the nearest 0.5.

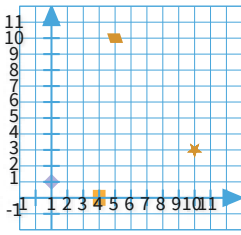


(,)

Show your work

#4

What are the coordinates of the rectangle? Write your answer as whole numbers or decimals, rounded to the nearest 0.5.



Legend

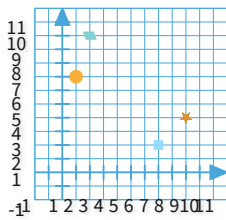
- rectangle
- ◆ rhombus
- ★ star
- ▭ parallelogram

- (4,10)
- (9,3)
- (3,0)
- (0,1)

Show your work


#5


Which shape is at (9, 4)?





Legend

- ★ star
- ▭ parallelogram
- square
- circle





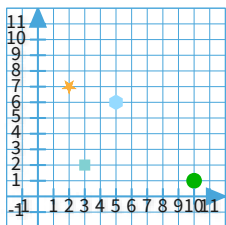




Show your work

#6

What are the coordinates of the square? Write your answer as whole numbers or decimals, rounded to the nearest 0.5.



Legend


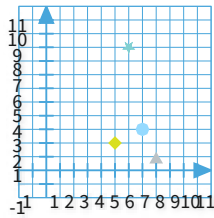
- square
- circle
- ★ star
- ⬡ hexagon

- (5,6)
- (2,7)
- (3,2)
- (10,1)

Show your work

#7

Which shape is at (7, 3)?

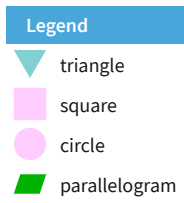
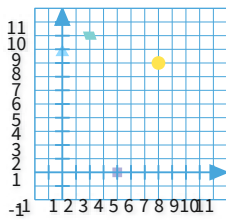


<input type="radio"/>	<input type="radio"/>	<input type="radio"/>	<input type="radio"/>

Show your work

#8

Which shape is at (0, 9)?

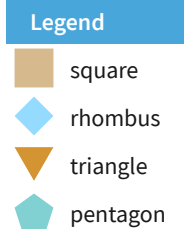
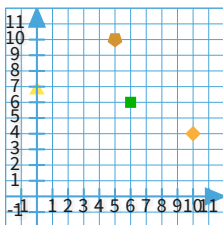


<input type="radio"/>	<input type="radio"/>	<input type="radio"/>	<input type="radio"/>

Show your work

#9

What are the coordinates of the square? Write your answer as whole numbers or decimals, rounded to the nearest 0.5.

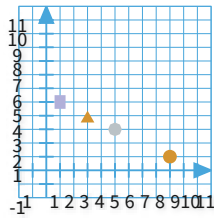


<input type="radio"/> (6,6)	<input type="radio"/> (5,10)
<input type="radio"/> (10,4)	<input type="radio"/> (0,7)

Show your work

#10

Which shape is at (9, 1)?



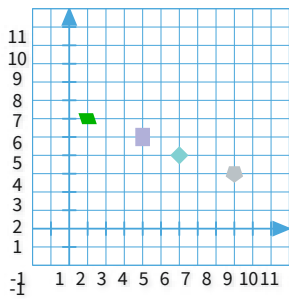
- Legend**
-  circle
 -  rectangle
 -  triangle
 -  octagon







Show your work

#11

What are the coordinates of the rhombus? Write your answer as whole numbers or decimals, rounded to the nearest 0.5.



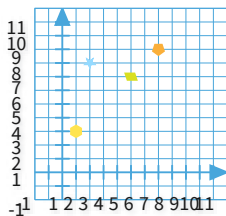
- Legend**
-  rhombus
 -  rectangle
 -  pentagon
 -  parallelogram





(,)


Show your work

#12

Which shape is at (7, 9)?



- Legend**
-  pentagon
 -  star
 -  parallelogram
 -  hexagon



Show your work

Question	Answer
#1	choice 1
#2	choice 2
#3	4, 3
#4	choice 3
#5	choice 4
#6	choice 3
#7	choice 4
#8	choice 3
#9	choice 1
#10	choice 1
#11	6, 4
#12	choice 4