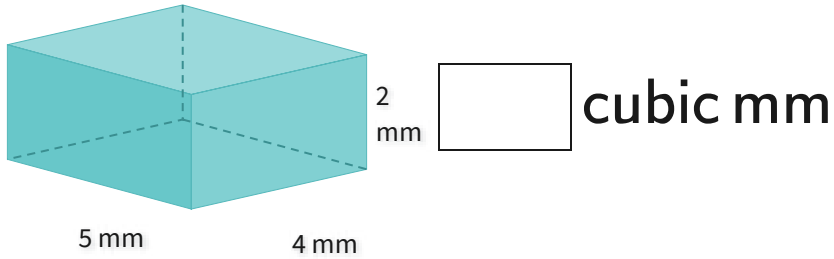


#1

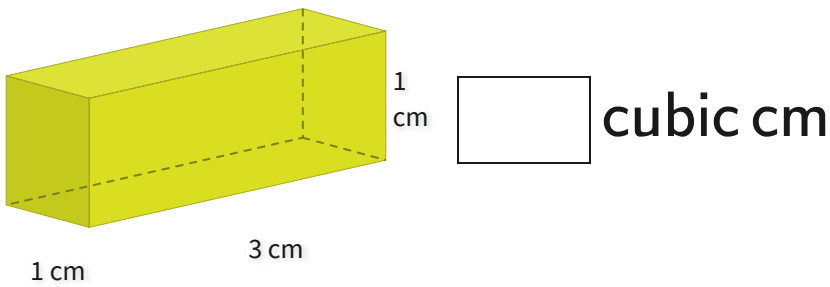
What is the volume?



Show your work

#2

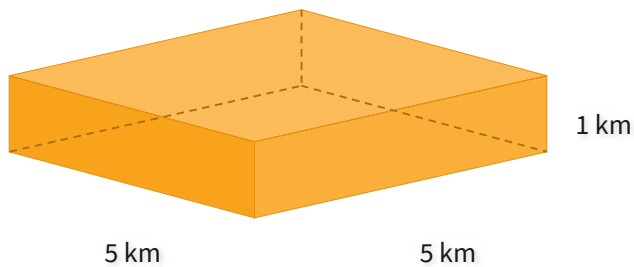
What is the volume?



Show your work

#3

What is the volume?

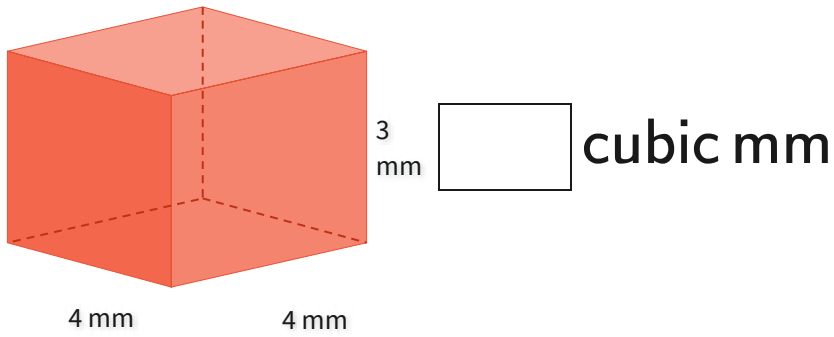


- ☐ 25 cubic km ☐ 26 cubic km
☐ 31 cubic km ☐ 20 cubic km

Show your work

#4

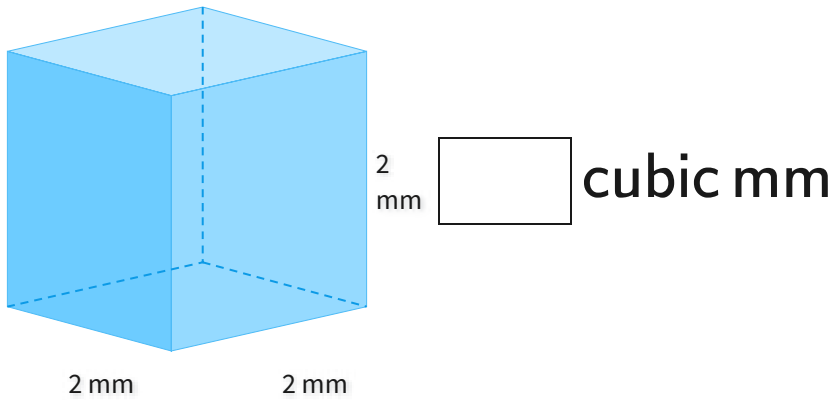
What is the volume?



Show your work

#5

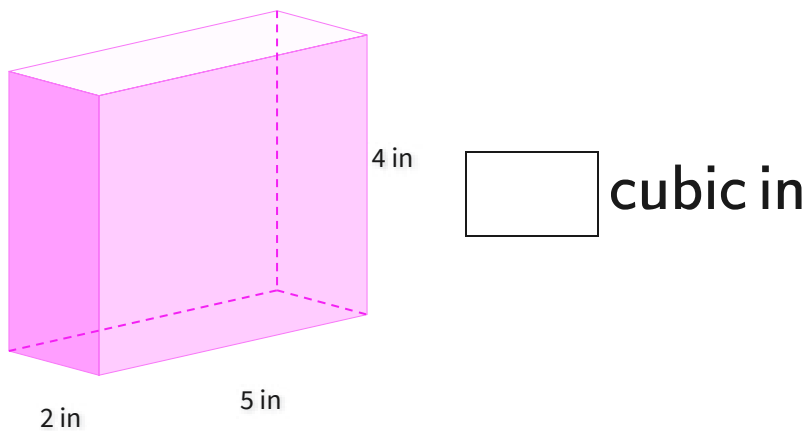
What is the volume?



Show your work

#6

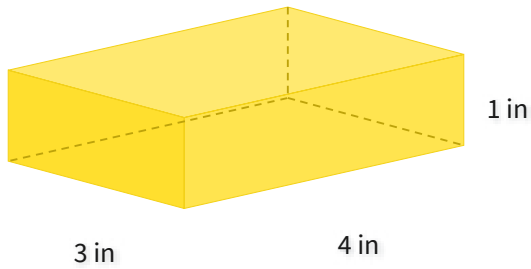
What is the volume?



Show your work

#7

What is the volume?

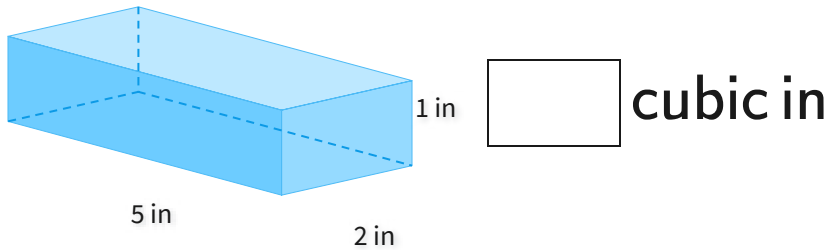


- ☐ 9 cubic in ☐ 12 cubic in
☐ 8 cubic in ☐ 14 cubic in

Show your work

#8

What is the volume?

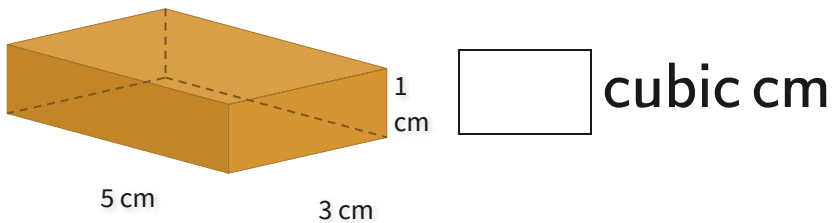


cubic in

Show your work

#9

What is the volume?

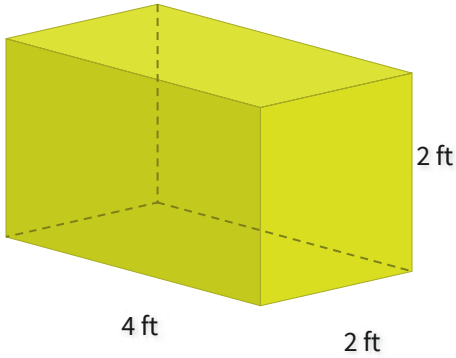


cubic cm

Show your work

#10

What is the volume?

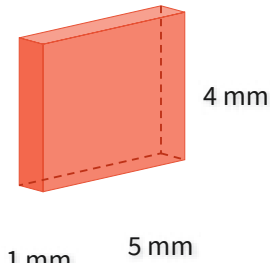


cubic ft

Show your work

#11

What is the volume?

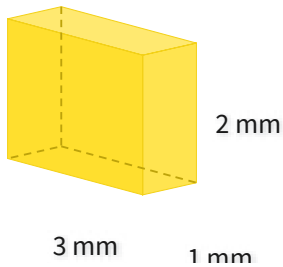


- ☐ 18 cubic mm ☐ 20 cubic mm
☐ 26 cubic mm ☐ 19 cubic mm

Show your work

#12

What is the volume?



- ☐ 8 cubic mm ☐ 9 cubic mm
☐ 7 cubic mm ☐ 6 cubic mm

Show your work

Question	Answer
#1	40
#2	3
#3	choice 1
#4	48
#5	8
#6	40
#7	choice 2
#8	10
#9	15
#10	16
#11	choice 2
#12	choice 4