


#1

What kind of shape is this?




- rectangular prism cone cylinder

Show your work

#2

What kind of shape is this?



- cube rectangular prism pentagon

Show your work

#3

What kind of shape is this?




- hexagon triangle rectangle

Show your work

#4

What kind of shape is this?




- cone
 triangle
 hexagon

Show your work

#5

What kind of shape is this?



- rectangular prism
 cone
 circle

Show your work

#6

What kind of shape is this?




- triangular prism
 rectangular prism
 square

Show your work

#7

What kind of shape is this?




- rectangular prism
 pentagon
 cone

Show your work

#8

What kind of shape is this?



- square
 triangle
 pentagon

Show your work

#9

What kind of shape is this?




- rectangular prism
 cylinder
 rectangular pyramid

Show your work

#10

What kind of shape is this?



- pentagon
 hexagon
 triangle

Show your work

#11

What kind of shape is this?



- pentagon
 triangular prism
 cylinder

Show your work

#12

What kind of shape is this?



- square
 cone
 hexagon

Show your work

Question	Answer
#1	choice 2
#2	choice 3
#3	choice 3
#4	choice 2
#5	choice 2
#6	choice 3
#7	choice 2
#8	choice 1
#9	choice 2
#10	choice 3
#11	choice 3
#12	choice 1