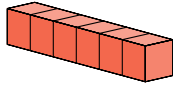


#1

This rectangular prism is made up of unit cubes. What is its volume?

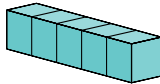


cubic units

Show your work

#2

This rectangular prism is made up of unit cubes. What is its volume?

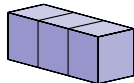


cubic units

Show your work

#3

This rectangular prism is made up of unit cubes. What is its volume?

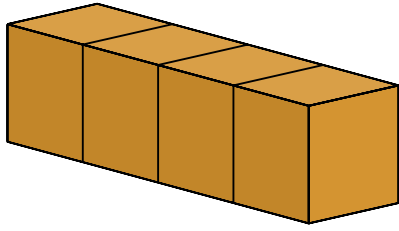


cubic units

Show your work

#4

This rectangular prism is made up of unit cubes. What is its volume?

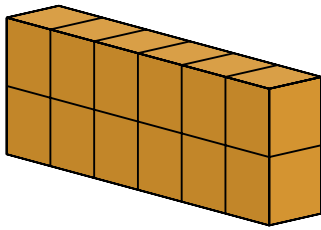


- 6 cubic units
- 3 cubic units
- 2 cubic units
- 4 cubic units

Show your work

#5

This rectangular prism is made up of unit cubes. What is its volume?

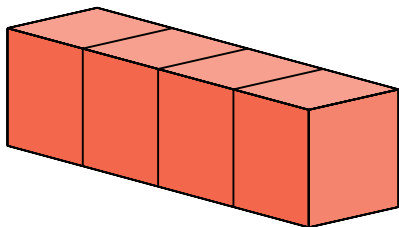


- 9 cubic units
- 10 cubic units
- 12 cubic units
- 14 cubic units

Show your work

#6

This rectangular prism is made up of unit cubes. What is its volume?

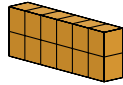


- 2 cubic units
- 7 cubic units
- 4 cubic units
- 6 cubic units

Show your work

#7

This rectangular prism is made up of unit cubes. What is its volume?

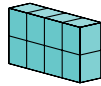


cubic units

Show your work

#8

This rectangular prism is made up of unit cubes. What is its volume?

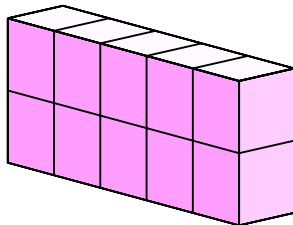


cubic units

Show your work

#9

This rectangular prism is made up of unit cubes. What is its volume?

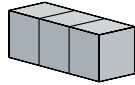


- 13 cubic units
- 12 cubic units
- 10 cubic units
- 8 cubic units

Show your work

#10

This rectangular prism is made up of unit cubes. What is its volume?



cubic units

Show your work

#11

This rectangular prism is made up of unit cubes. What is its volume?



cubic units

Show your work

#12

This rectangular prism is made up of unit cubes. What is its volume?



cubic units

Show your work

Question	Answer
#1	6
#2	5
#3	3
#4	choice 4
#5	choice 3
#6	choice 3
#7	12
#8	8
#9	choice 3
#10	3
#11	3
#12	6