


#1

Jacob is in his space ship and just arrived at the solar system Kepler-186. He made a graph of the number of moons around each of the planets. How many moons orbit Kepler-186 d?




- 1
- 2
- 3
- 4

Show your work

#2

Look at the following pictograph. How many presents did Angela give for Christmas?



- 2
- 3
- 4
- 5

Show your work

#3

Look at the following pictograph. It shows the number of planes Samantha went on each month. How many times did Samantha fly in April?




- 7
- 4
- 8
- 6

Show your work

#4

Look at the following pictograph. It shows the number of planes Caden went on each month. How many times did Caden fly in April?



- 10
- 11
- 7
- 9

Show your work

#5

Look at the following pictograph. How many presents did Evan give for Christmas?




- 1
- 2
- 3
- 4

Show your work

#6

Abigail is in her space ship and just arrived at the solar system Kepler-186. She made a graph of the number of moons around each of the planets. How many moons orbit Kepler-186 e?




moon(s)

Show your work

#7

Look at the following pictograph. How many action figures does Matilda own?



- 13
- 10
- 9
- 8

Show your work

#8

Ants are crawling on Alyssa. Look at the following pictograph. How many ants are on her Legs?




ant(s)

Show your work

#9

Look at the following pictograph. It shows the number of planes Emma went on each month. How many times did Emma fly in February?



- 4
- 5
- 7
- 6

Show your work

#10

Ants are crawling on Logan. Look at the following pictograph. How many ants are on his Arms?




ant(s)

Show your work

#11

Look at the following pictograph. It shows the number of penalty yards each football team has received. How many penalty yards did the Merauders get?




- 9
- 10
- 13
- 11

Show your work

#12

Look at the following pictograph. It shows the number of penalty yards each football team has received. How many penalty yards did the Predators get?



- 7
- 4
- 3
- 6

Show your work

Question	Answer
#1	1
#2	2
#3	7
#4	9
#5	2
#6	2
#7	10
#8	3
#9	4
#10	7
#11	10
#12	4