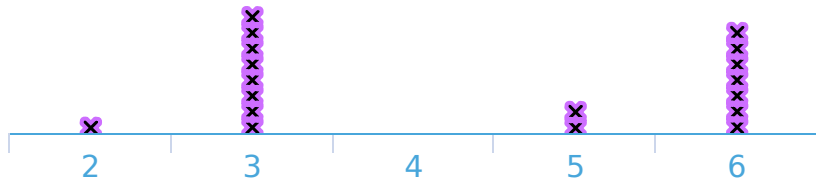


#1 Gabriel takes people on bird watching tours. He records the number of birds that each person sees. How many birds did the least number of people see?

Birds Spotted



- 7
- 6
- 4
- 1

Show your work

#2 Chloe owns a store and records the number of items each customer purchased. How many items did the lowest number of customers purchase?

Customer Purchases



Purchases:

Show your work

#3 Ryan serves sushi at a party and records how many pieces each person eats. How many people ate sushi?

Sushi Eaten




person(s)

Show your work

#4

Coach Emma records the long jump distances for each student. How many students did the long jump?

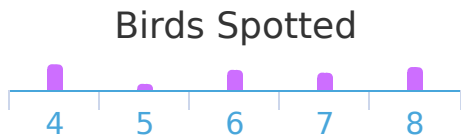


student(s)

Show your work

#5

Sophia takes people on bird watching tours. She records the number of birds that each person sees. How many people went on the bird watching tour?




person(s)

Show your work

#6

Darren serves sushi at a party and records how many pieces each person eats. How many pieces did the greatest number of people eat?

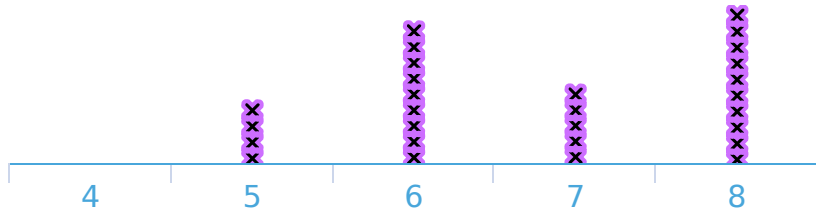


- 6
- 8
- 9
- 10

Show your work

#7 Matilda is studying bees. She records how many flowers each bee visits before returning to the hive. How many flowers did the least number of bees visit?

Flowers Visited




- 7
- 6
- 5
- 4

Show your work

#8 Samantha is studying bees. She records how many flowers each bee visits before returning to the hive. How many bees did Samantha record?

Flowers Visited

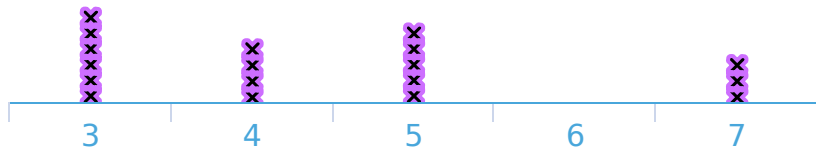


- 19
- 15
- 25
- 20

Show your work

#9 Ethan sells tickets at an amusement park and records the number that each person buys. How many tickets did the least number of people buy?

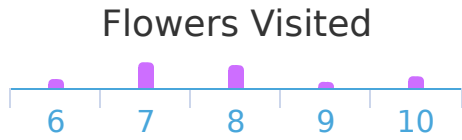
Tickets Purchased



- 8
- 7
- 6
- 3

Show your work

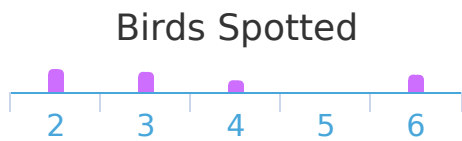
#10 Noah is studying bees. He records how many flowers each bee visits before returning to the hive. How many flowers did the least number of bees visit?



Flowers:

Show your work

#11 Matilda takes people on bird watching tours. She records the number of birds that each person sees. How many people went on the bird watching tour?



person(s)

Show your work

#12 Aiden is recording how many solar panels are on each house in his neighbourhood. How many solar panels were on the least number of houses?



Solar Panels:

Show your work

Question	Answer
#1	4
#2	8
#3	23
#4	18
#5	32
#6	9
#7	4
#8	20
#9	6
#10	9
#11	25
#12	7