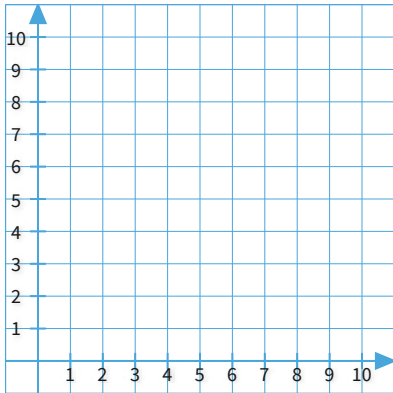


#1

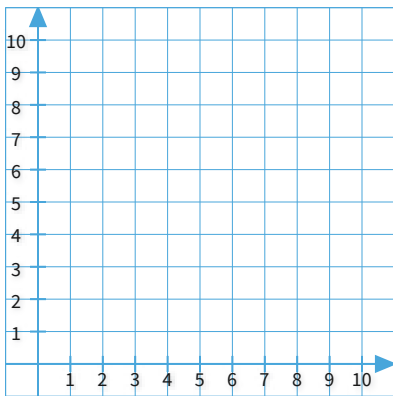
Graph the point  $(2, 9)$  on the coordinate plane.



Show your work

#2

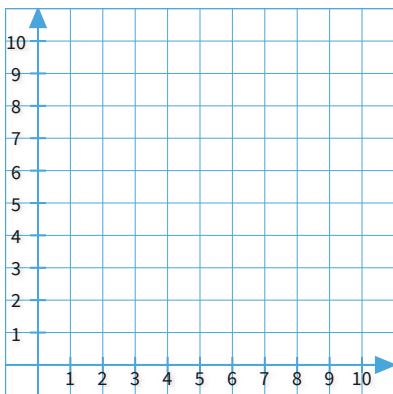
Graph the point  $(10, 0)$  on the coordinate plane.



Show your work

#3

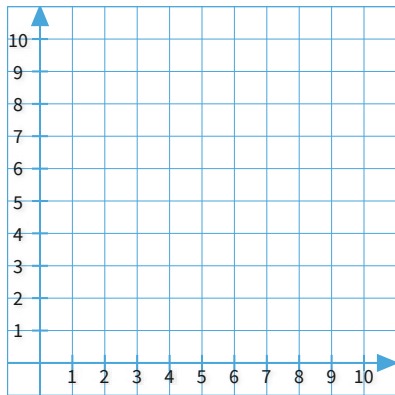
Graph the point  $(9, 3)$  on the coordinate plane.



Show your work

#4

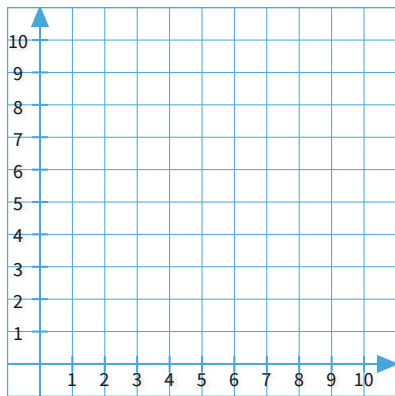
Graph the point  $(0, 6)$  on the coordinate plane.



Show your work

#5

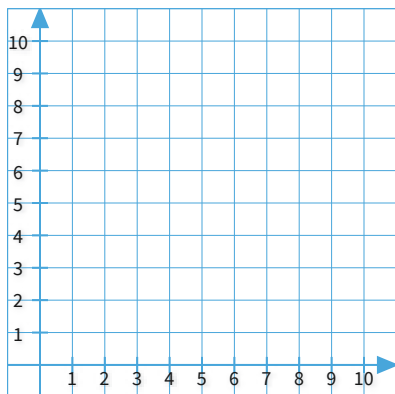
Graph the point  $(10, 3)$  on the coordinate plane.



Show your work

#6

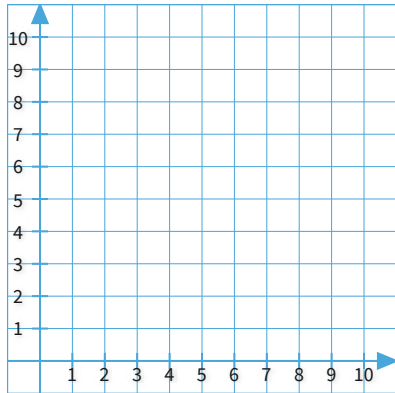
Graph the point  $(3, 8)$  on the coordinate plane.



Show your work

#7

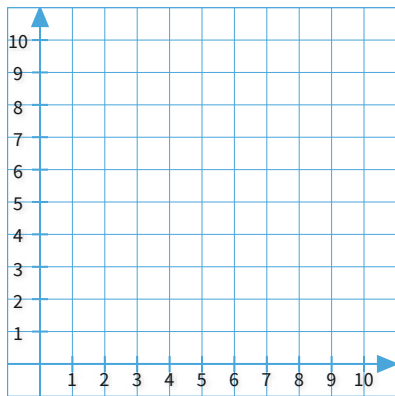
Graph the point  $(9, 1)$  on the coordinate plane.



Show your work

#8

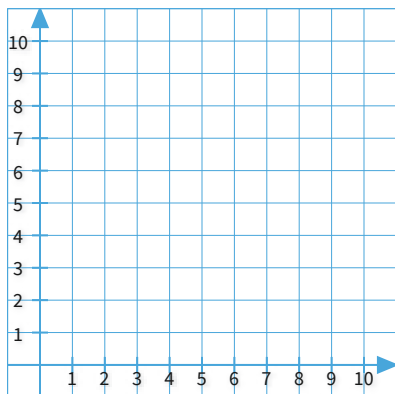
Graph the point  $(2, 0)$  on the coordinate plane.



Show your work

#9

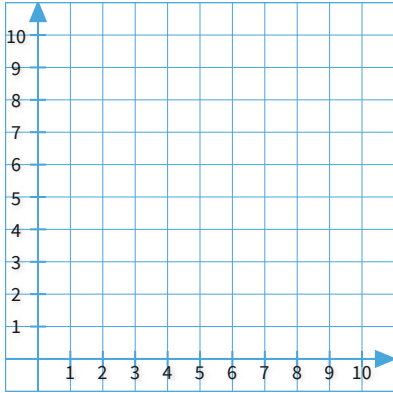
Graph the point  $(3, 8)$  on the coordinate plane.



Show your work

#10

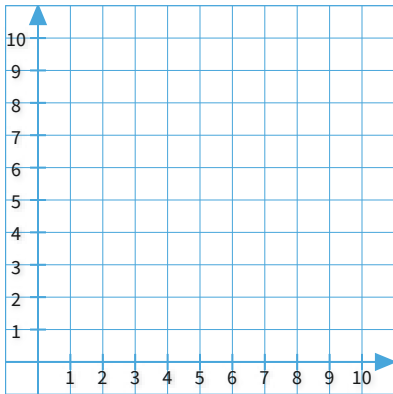
Graph the point  $(8, 10)$  on the coordinate plane.



Show your work

#11

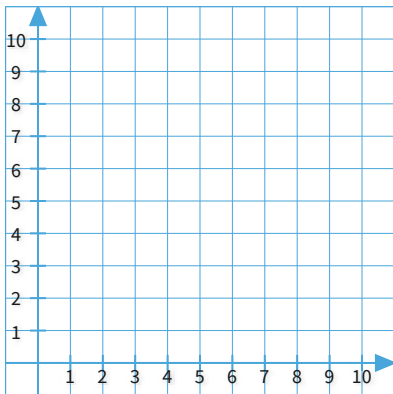
Graph the point  $(10, 3)$  on the coordinate plane.



Show your work

#12

Graph the point  $(2, 5)$  on the coordinate plane.



Show your work

Question	Answer
#1	[object Object]
#2	[object Object]
#3	[object Object]
#4	[object Object]
#5	[object Object]
#6	[object Object]
#7	[object Object]
#8	[object Object]
#9	[object Object]
#10	[object Object]
#11	[object Object]
#12	[object Object]